

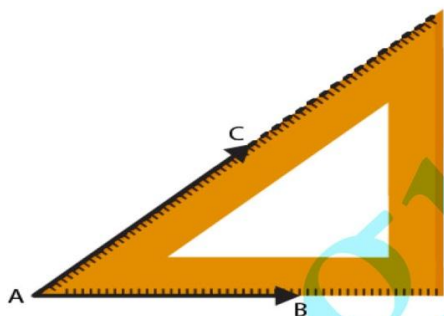
RD Sharma Solutions for Class 6 Maths Chapter 18 –
Basic Geometrical ToolsEXERCISE 18.1

PAGE: 18.3

1. Construct the following angles using set-squares:(i) 45° (ii) 90° (iii) 60° (iv) 105° (v) 75° (vi) 150° **Solution:**

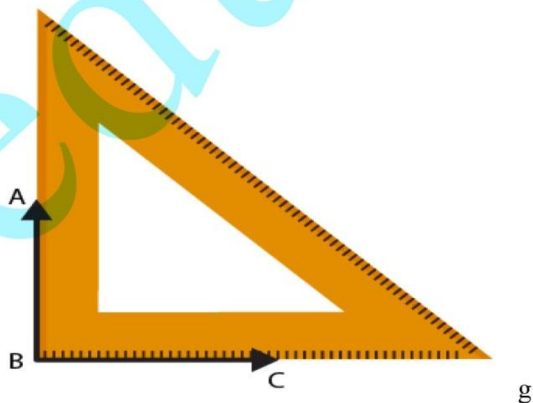
(i) Now place 45° using set square. Construct two rays AB and AC along the edges from the vertex A of 45° angle of the set square. So the angle formed is 45°

Hence, $\angle BAC = 45^\circ$



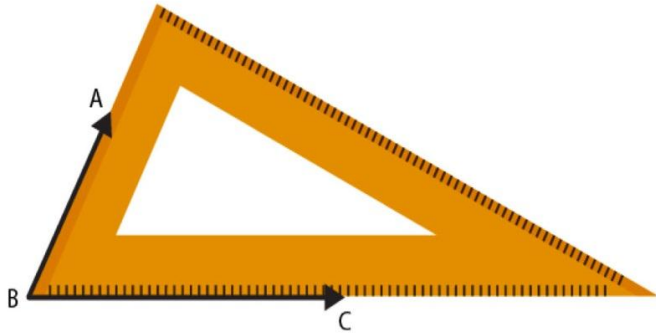
(ii) Now place 90° using set square. Construct two rays BC and BA along the edges from the vertex B of 90° angle of the set square. So the angle formed is 90°

Hence, $\angle ABC = 90^\circ$

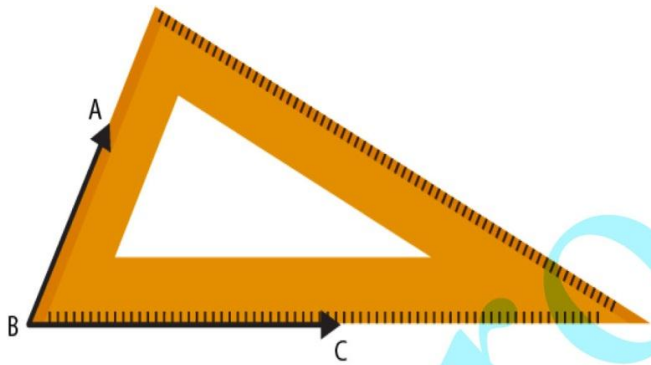


(iii) Now place 60° using set square. Construct two rays BC and BA along the edges from the vertex B of 60° angle of the set square. So the angle formed is 60°

Hence, $\angle ABC = 60^\circ$

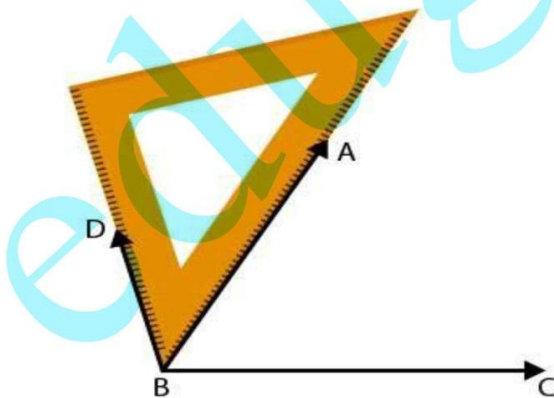
**RD Sharma Solutions for Class 6 Maths Chapter 18 –
Basic Geometrical Tools**

(iv) Now place 30° using set square and make an angle 60° . Construct two rays BA and BC as in given figure.

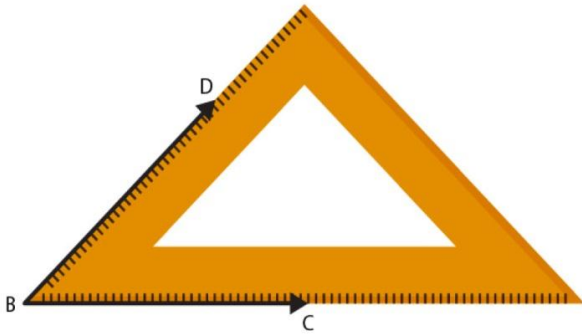


Place the set square of angle 45° of the set-square on the ray BA and draw the ray BD. So the angle formed is 105° .

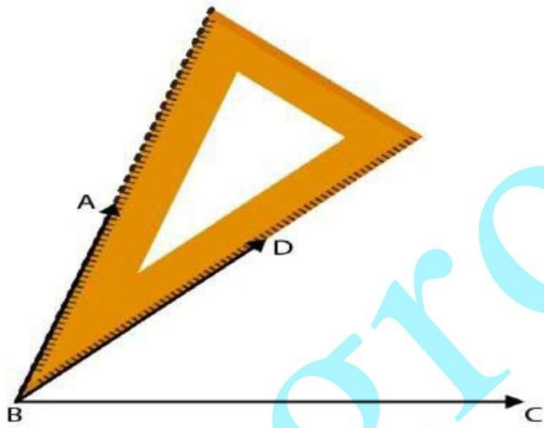
Hence, $\angle DBC = 105^\circ$




(v) Now place 45° using set square and make an angle 45° . Construct two rays BC and BD as shown in figure.

**RD Sharma Solutions for Class 6 Maths Chapter 18 –
Basic Geometrical Tools**

Place the vertex of 30° of the set square on the ray on the ray BD and draw the ray BA. So the angle formed is 75°
Hence, $\angle ABC = 75^\circ$.

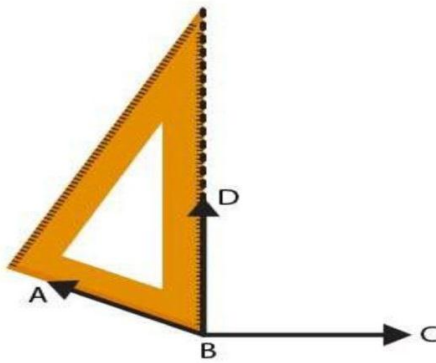


(vi) Now place the vertex of 45° of the set square and make an angle 90° and construct two rays BD and BC as shown in figure.



Place the vertex of 30° of the set square on the ray BC and draw the ray BA. So the angle formed is 150°

RD Sharma Solutions for Class 6 Maths Chapter 18 –
Basic Geometrical Tools



Hence, $\angle ABC = 150^\circ$

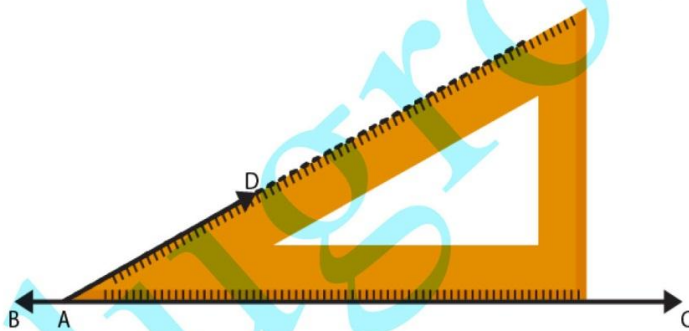
2. Given a line BC and a point A on it, construct a ray AD using set squares so that $\angle DAC$ is

(i) 30°

(ii) 150°

Solution:

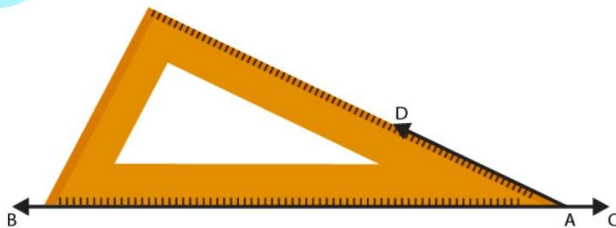
(i) Construct a line BC and mark a point A on it. Now place a 30° set square on the line BC where its vertex of 30° angle lies on point A where one edge coincides with the ray AB as in shown in figure. Construct the ray AD.



Hence, the required $\angle DAC = 30^\circ$

(ii) Construct a line BC and mark a point A on it. Now place 30° set square on the line BC having its vertex of 30° lies on point A where one edge coincides with the ray AB as shown in figure. Construct the ray AD

Hence, $\angle DAB = 30^\circ$



RD Sharma Solutions for Class 6 Maths Chapter 18 –
Basic Geometrical ToolsEXERCISE 18.2

PAGE: 18.5

1. Mark two points, A and B on a piece of paper and join them. Measure this length. For each of the following draw a line segment CD that is:

- (i) equal to the segment AB
- (ii) twice AB
- (iii) three times AB
- (iv) half AB
- (v) collinear with AB and is equal to it.

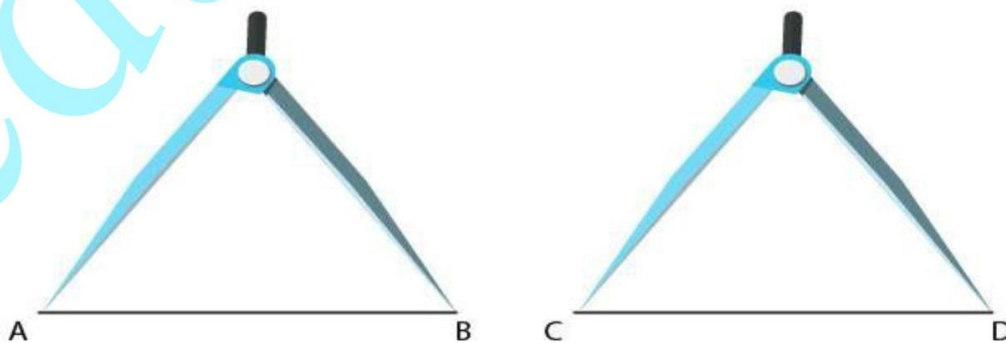
Solution:

Mark points A and B on a piece of paper and join them as shown in figure.

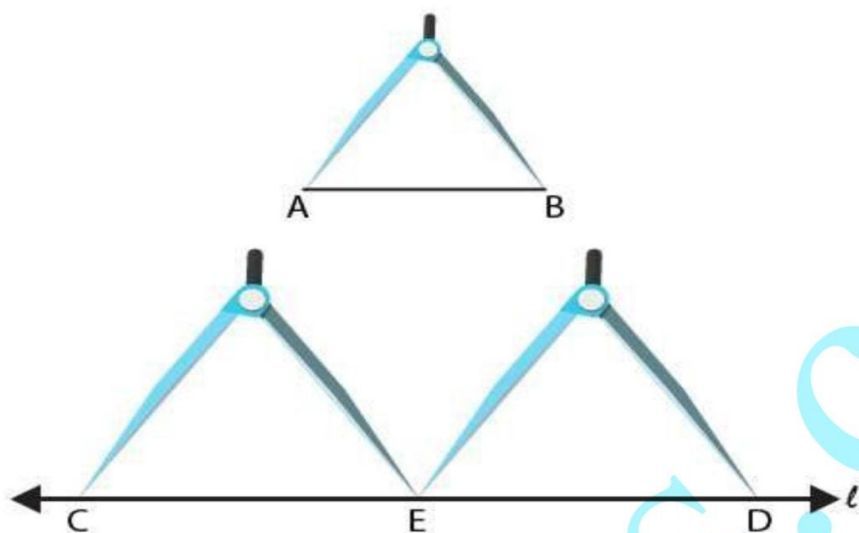


Now place the ruler with its edge along AB to measure the length AB, such that the zero mark of the cm side of the ruler coincides the point A. Read the mark on the ruler, which corresponds to the point B. The value obtained on the ruler at point B is the length of AB i.e. $AB = 5.6$ cm

- (i) In order to construct the line segment CD which is equal to AB, take a divider and open it, so that the end-point of one of its arms is at A and the second arm end-point is at B. Now lift the divider and place the end-points of both hands on the paper, where CD has to be drawn.



- (ii) In order to construct a line segment twice AB, construct a line l and mark a point C on it. Take a divider and open it so that end-points of both of its arms are at A and B. Then without disturbing its opening lift the divider, place one end-point at point C and the other end-point on the line l. Now, lift the divider and place one end-point at E and the other end-point on the line l, opposite to point C and name it as D.

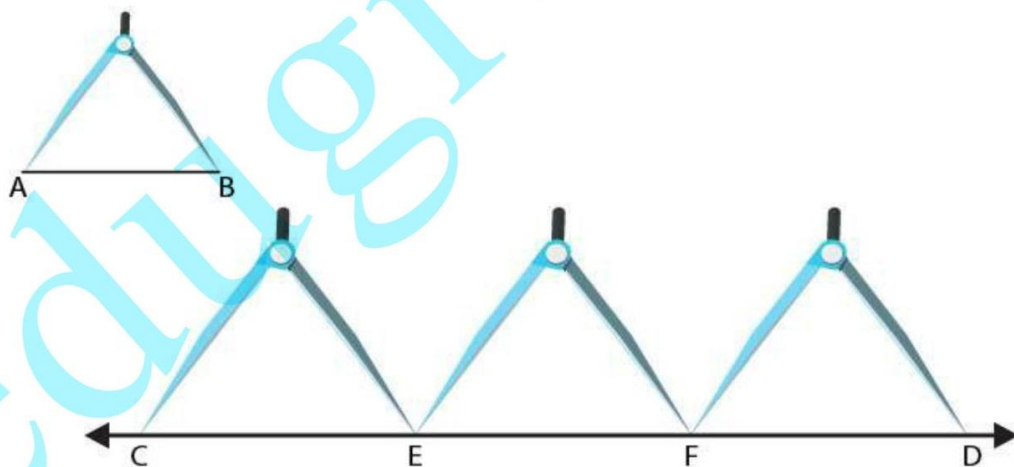
**RD Sharma Solutions for Class 6 Maths Chapter 18 –
Basic Geometrical Tools**

(iii) In order to construct the line segment three times A , construct a line l and mark a point C on it. Take a divider and open it such that the end-points of both of its arms are at A and B .

Now lift the divider and place one end-point at point C and the other end-point on the line l and mark it as E .

Lift the divider and place one end-point at E and the other end-point on the line l , opposite to point C and mark it as F .

Lift the divider and place one end-point at F and the other end-point on the line l , opposite to C and mark it as D .



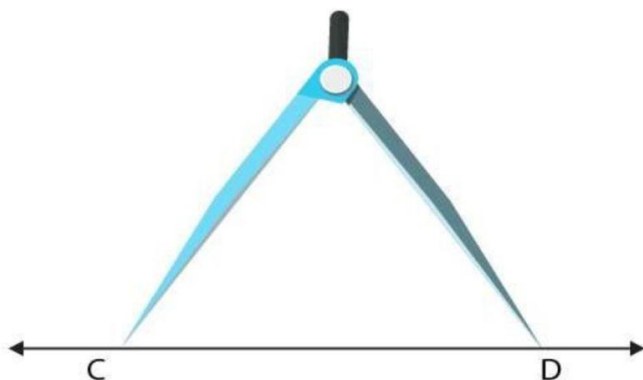
(iv) In order to construct the line segment that is half AB , construct a line l and mark a point C on it. With the help of a ruler measure the line segment $AB = 5.6$ cm

So half of $AB = 5.6/2 = 2.8$ cm

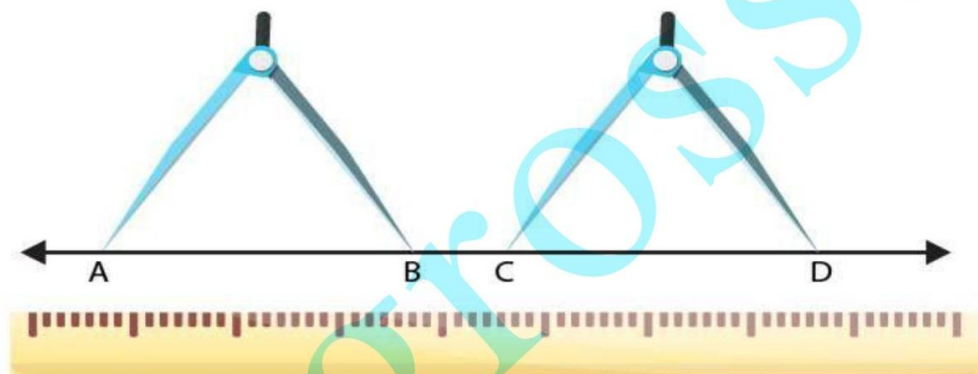
Take a divider and open it such that one end arm is at 0 and the other end arm is at 2.8 cm.

Lift the divider and place one end at point C and the other end on the line l at point D .

RD Sharma Solutions for Class 6 Maths Chapter 18 – Basic Geometrical Tools

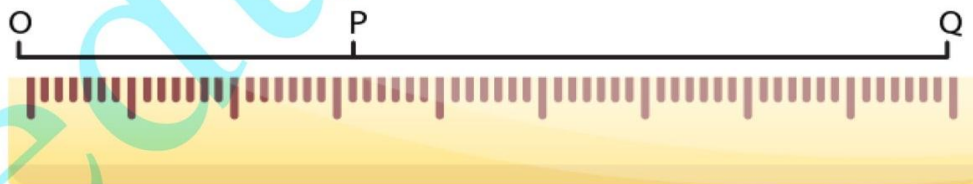


(v) In order to construct a line segment CD collinear with AB and is equal to it, use a ruler along AB and draw the line extended to AB. Take a divider and open it such that both of its end-points are the points A and B. Lift the divider and place its end-points of both of its arms on the extended line of AB and mark them as points C and D.



2. The end point P of a line segment PQ is against 4 cm mark and the end-point Q is against the mark indicating 14.8 cm on a ruler. What is the length of the segment PQ?

Solution:



Now we have to extend the line segment QP towards point O of the ruler and take a point O on the line QP which is extended corresponding to point O on the ruler.

From the diagram we know that

$$OP = 4 \text{ cm}$$

$$OQ = 14.8 \text{ cm}$$

It can be written as,

$$PQ = OQ - OP = (14.8 - 4) \text{ cm} = 10.8 \text{ cm}$$

**RD Sharma Solutions for Class 6 Maths Chapter 18 –
Basic Geometrical Tools**

3. Draw a line segment CD. Produce it to CE such that $CE = 3CD$.

Solution:

Draw a line l and take two points C and D on it.

Now take a divider and open it such that its end of both arms are at the points C and D.

Lift the divider and place its one end at D and the other end on the line l opposite to C and mark it as point A.

Again lift the divider and place its one end at A and the other end on the line l opposite to C and mark it as point E.

We know that $CD = DE = AE$

It can be written as,

$$CE = CD + DE + AE$$

We know that $CD = DE = AE$

So we get

$$CE = CD + CD + CD = 3CD$$

We get

$$CE = 3CD$$

4. If $AB = 7.5$ cm and $CD = 2.5$ cm, construct a segment whose length is equal to

(i) $AB - CD$

(ii) $2AB$

(iii) $3CD$

(iv) $AB + CD$

(v) $2AB + 3CD$

Solution:

It is given that

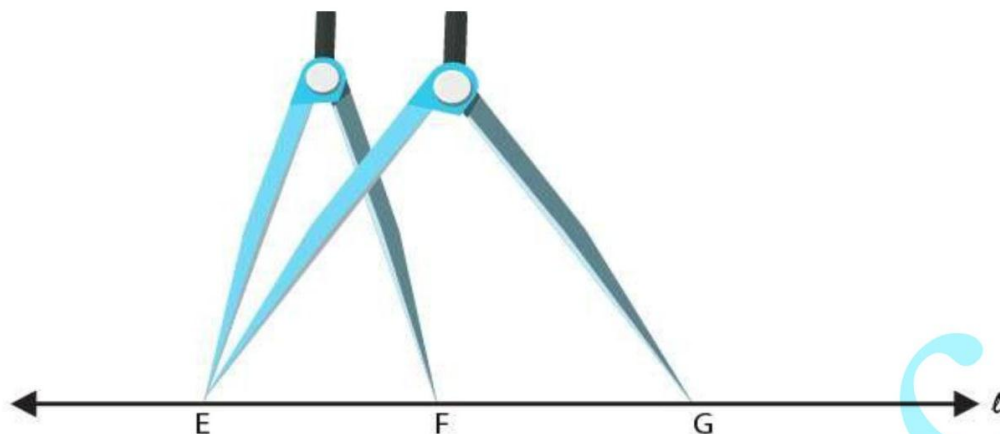
$$AB = 7.5 \text{ cm and } CD = 2.5 \text{ cm}$$

Construct AB and CD

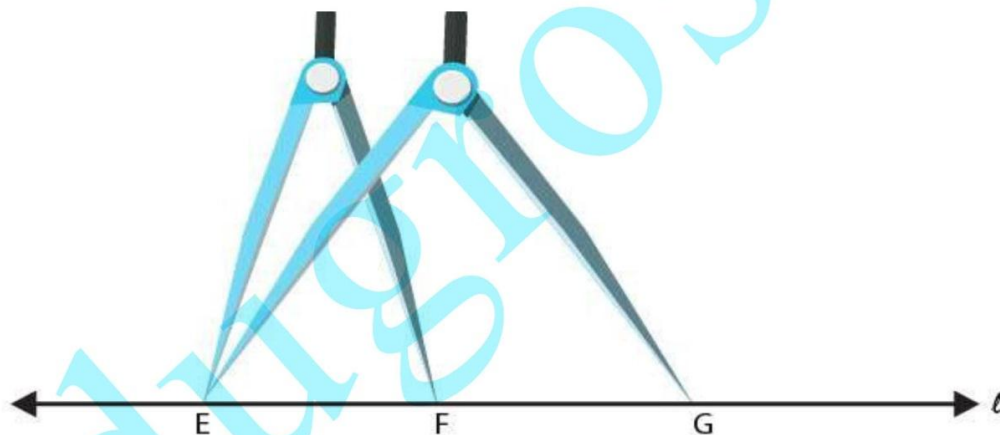


(i) Construct a line l and mark a point E on it.

Take a divider and open it such that both the end arms are at points A and B. Now, lift the divider and place its one end at E and other end at F on the line l. Reset the divider by making one end of its one hand is at C and the end of the other hand is at D. Again lift the divider and place its one end at E and other end at G on the line l. FG is required line segment having the length equal to $(AB - CD)$.


**RD Sharma Solutions for Class 6 Maths Chapter 18 –
Basic Geometrical Tools**

- (ii) Construct a line l and mark a point E on it. Take a divider and open such that both its end arm are at A and B . Lift the divider and place its one end at E and the other end as F on the line l . Again, lift the divider and place its one end at F and the other end on the line l , opposite to E and mark it as G . EG is the required line segment having the length equal to $2 AB$.



- (iii) Construct a line l and mark a point E on it. Take a divider and open such that both of its ends are at C and D respectively. Lift the divider and place its end at point E on it and the other end F on the line l . Again, lift the divider and mark end as G on the line opposite to C . Lift the divider and place its one end at G and another end H on the line l , opposite to E . EH is required line segment having the length equal to $3 CD$.

RD Sharma Solutions for Class 6 Maths Chapter 18 – Basic Geometrical Tools

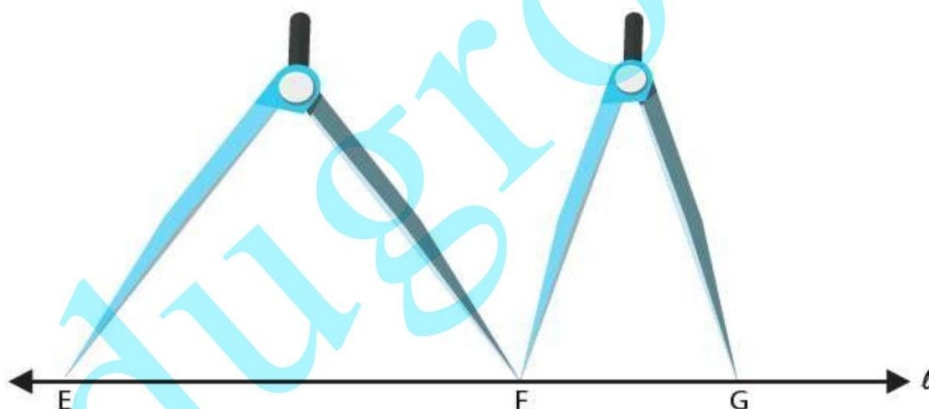


(iv) Construct a line l and mark a point E on it. Take a divider and open it such that both its arms are at A and B . Lift the divider and place one of its end at F on the line l

Reset the divider such that the end of its one hand is at C and the other hand end is at D .

Lift the divider and place its one end at F and another end at G on the line l opposite to E .

EG is required line segment having the length equal to $(AB + CD)$



(v) Construct a line l and mark a point E on it. Take a divider and open such that end of both of its arms are at A and B . Lift the divider and place its one end at E and the other end F on the line l .

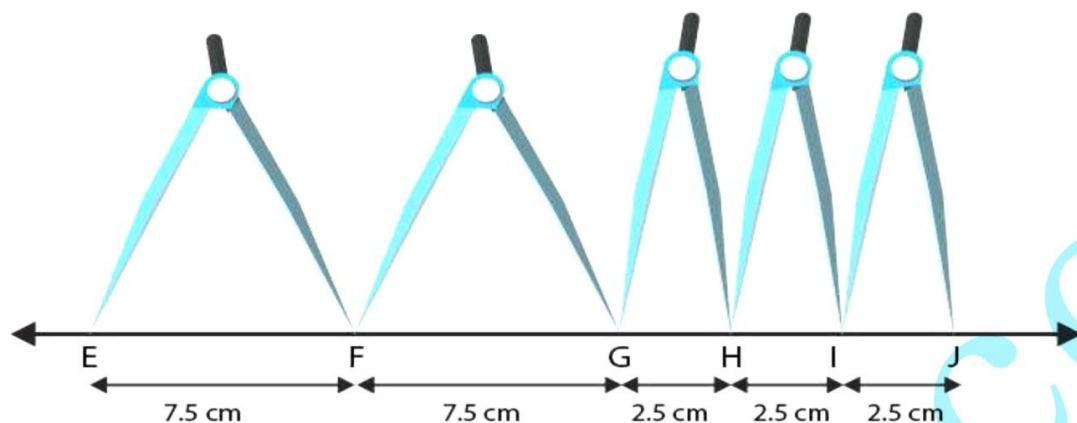
Again, lift the divider and place its one end at F and another end at G on the line l , opposite to E . Reset the divider such that the end of its one hand is at C and the other end is at D .

Lift the divider and place its one end at G and other end at H on the line l , opposite to E .

Again, lift the divider and place its one end at H and other end at I on the line l , opposite to E . Again, lift the divider and place its one end at I and another end at J on the line l , opposite to E .

EG is required line segment having the length equal to $(2AB + 3CD)$

**RD Sharma Solutions for Class 6 Maths Chapter 18 –
Basic Geometrical Tools**



5. Fill in the blanks:

- (i) A part of a line with two end-points is called a
- (ii) Segment AB issegment BA.
- (iii) The length of a line segment is thedistance between two end points.
- (iv) Two segments are concurrent only if they have
- (v) Two segments of the same length are said to be

Solution:

- (i) A part of a line with two end-points is called a Line segment
- (ii) Segment AB is equal to segment BA
- (iii) The length of a line segment is the shortest distance between two end points.
- (iv) Two segments are concurrent only if they have equal length
- (v) Two segments of the same length are said to be congruent

6. Match the following statements:

Column A

- (i) Line segment has
- (ii) Two segments may intersect
- (iii) Two segments are congruent
- (iv) Line segment is

Column B

- (a) at a point
- (b) if they have equal lengths
- (c) two end-points
- (d) portion of a line

**RD Sharma Solutions for Class 6 Maths Chapter 18 –
Basic Geometrical Tools****Solution:**

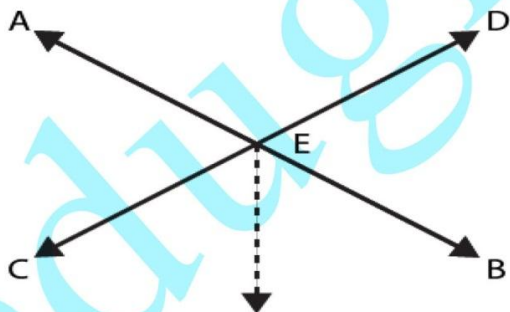
- (i) Line segment has two end-points.
- (ii) Two segments may intersect at a point.
- (iii) Two segments are congruent if they have equal lengths.
- (iv) Line segment is portion of a line.

7. Tell which of the following statements are true (T) and which are false (F):

- (i) The intersection of two segments may be a segment.
- (ii) Two segments may intersect at a point which is not any end-point of either segments containing it.
- (iii) Every ray is a segment
- (iv) Every segment is a ray.

Solution:

- (i) False. Two line segments intersect at one point which cannot make a line segment.



- (ii) True. In two line segments, we know that the point of intersection will not be at the end points.

