

EXERCISE 3.1

PAGE NO: 3.4

1. Which of the following numbers are perfect squares?**(i) 484****(ii) 625****(iii) 576****(iv) 941****(v) 961****(vi) 2500****Solution:****(i) 484**

First find the prime factors for 484

$$484 = 2 \times 2 \times 11 \times 11$$

By grouping the prime factors in equal pairs we get,

$$= (2 \times 2) \times (11 \times 11)$$

By observation, none of the prime factors are left out.

 \therefore 484 is a perfect square.**(ii) 625**

First find the prime factors for 625

$$625 = 5 \times 5 \times 5 \times 5$$

By grouping the prime factors in equal pairs we get,

$$= (5 \times 5) \times (5 \times 5)$$

By observation, none of the prime factors are left out.

 \therefore 625 is a perfect square.**(iii) 576**

First find the prime factors for 576

$$576 = 2 \times 2 \times 2 \times 2 \times 2 \times 2 \times 3 \times 3$$

By grouping the prime factors in equal pairs we get,

$$= (2 \times 2) \times (2 \times 2) \times (2 \times 2) \times (3 \times 3)$$

By observation, none of the prime factors are left out.

 \therefore 576 is a perfect square.**(iv) 941**

First find the prime factors for 941

$$941 = 941 \times 1$$

We know that 941 itself is a prime factor.

RD Sharma Solutions for Class 8 Maths Chapter 3 –
Squares and Square Roots

$\therefore 941$ is not a perfect square.

(v) 961

First find the prime factors for 961

$$961 = 31 \times 31$$

By grouping the prime factors in equal pairs we get,
 $= (31 \times 31)$

By observation, none of the prime factors are left out.

$\therefore 961$ is a perfect square.

(vi) 2500

First find the prime factors for 2500

$$2500 = 2 \times 2 \times 5 \times 5 \times 5 \times 5$$

By grouping the prime factors in equal pairs we get,
 $= (2 \times 2) \times (5 \times 5) \times (5 \times 5)$

By observation, none of the prime factors are left out.

$\therefore 2500$ is a perfect square.

2. Show that each of the following numbers is a perfect square. Also find the number whose square is the given number in each case:

(i) 1156

(ii) 2025

(iii) 14641

(iv) 4761

Solution:

(i) 1156

First find the prime factors for 1156

$$1156 = 2 \times 2 \times 17 \times 17$$

By grouping the prime factors in equal pairs we get,
 $= (2 \times 2) \times (17 \times 17)$

By observation, none of the prime factors are left out.

$\therefore 1156$ is a perfect square.

To find the square of the given number

$$1156 = (2 \times 17) \times (2 \times 17)$$

$$= 34 \times 34$$

$$= (34)^2$$

$\therefore 1156$ is a square of 34.

RD Sharma Solutions for Class 8 Maths Chapter 3 –
Squares and Square Roots

(ii) 2025

First find the prime factors for 2025

$$2025 = 3 \times 3 \times 3 \times 3 \times 5 \times 5$$

By grouping the prime factors in equal pairs we get,

$$= (3 \times 3) \times (3 \times 3) \times (5 \times 5)$$

By observation, none of the prime factors are left out.

\therefore 2025 is a perfect square.

To find the square of the given number

$$2025 = (3 \times 3 \times 5) \times (3 \times 3 \times 5)$$

$$= 45 \times 45$$

$$= (45)^2$$

\therefore 2025 is a square of 45.

(iii) 14641

First find the prime factors for 14641

$$14641 = 11 \times 11 \times 11 \times 11$$

By grouping the prime factors in equal pairs we get,

$$= (11 \times 11) \times (11 \times 11)$$

By observation, none of the prime factors are left out.

\therefore 14641 is a perfect square.

To find the square of the given number

$$14641 = (11 \times 11) \times (11 \times 11)$$

$$= 121 \times 121$$

$$= (121)^2$$

\therefore 14641 is a square of 121.

(iv) 4761

First find the prime factors for 4761

$$4761 = 3 \times 3 \times 23 \times 23$$

By grouping the prime factors in equal pairs we get,

$$= (3 \times 3) \times (23 \times 23)$$

By observation, none of the prime factors are left out.

\therefore 4761 is a perfect square.

To find the square of the given number

$$4761 = (3 \times 23) \times (3 \times 23)$$

$$= 69 \times 69$$

$$= (69)^2$$

\therefore 4761 is a square of 69.

RD Sharma Solutions for Class 8 Maths Chapter 3 –
Squares and Square Roots

3. Find the smallest number by which the given number must be multiplied so that the product is a perfect square:

(i) 23805

(ii) 12150

(iii) 7688

Solution:

(i) 23805

First find the prime factors for 23805

$$23805 = 3 \times 3 \times 23 \times 23 \times 5$$

By grouping the prime factors in equal pairs we get,

$$= (3 \times 3) \times (23 \times 23) \times 5$$

By observation, prime factor 5 is left out.

So, multiply by 5 we get,

$$23805 \times 5 = (3 \times 3) \times (23 \times 23) \times (5 \times 5)$$

$$= (3 \times 5 \times 23) \times (3 \times 5 \times 23)$$

$$= 345 \times 345$$

$$= (345)^2$$

∴ Product is the square of 345.

(ii) 12150

First find the prime factors for 12150

$$12150 = 2 \times 2 \times 2 \times 2 \times 3 \times 3 \times 5 \times 5 \times 2$$

By grouping the prime factors in equal pairs we get,

$$= (2 \times 2) \times (2 \times 2) \times (3 \times 3) \times (5 \times 5) \times 2$$

By observation, prime factor 2 is left out.

So, multiply by 2 we get,

$$12150 \times 2 = (2 \times 2) \times (2 \times 2) \times (3 \times 3) \times (5 \times 5) \times (2 \times 2)$$

$$= (2 \times 2 \times 3 \times 5 \times 2) \times (2 \times 2 \times 3 \times 5 \times 2)$$

$$= 120 \times 120$$

$$= (120)^2$$

∴ Product is the square of 120.

(iii) 7688

First find the prime factors for 7688

$$7688 = 2 \times 2 \times 31 \times 31 \times 2$$

By grouping the prime factors in equal pairs we get,

$$= (2 \times 2) \times (31 \times 31) \times 2$$

By observation, prime factor 2 is left out.

So, multiply by 2 we get,

$$\begin{aligned}7688 \times 2 &= (2 \times 2) \times (31 \times 31) \times (2 \times 2) \\&= (2 \times 31 \times 2) \times (2 \times 31 \times 2) \\&= 124 \times 124 \\&= (124)^2\end{aligned}$$

∴ Product is the square of 124.

4. Find the smallest number by which the given number must be divided so that the resulting number is a perfect square:

(i) 12283

(ii) 1800

(iii) 2904

Solution:

(i) 12283

First find the prime factors for 12283

$$12283 = 3 \times 3 \times 3 \times 23 \times 23$$

By grouping the prime factors in equal pairs we get,

$$= (3 \times 3) \times (23 \times 23) \times 3$$

By observation, prime factor 3 is left out.

So, divide by 3 to eliminate 3 we get,

$$12283/3 = (3 \times 3) \times (23 \times 23)$$

$$= (3 \times 23) \times (3 \times 23)$$

$$= 69 \times 69$$

$$= (69)^2$$

∴ Resultant is the square of 69.

(ii) 1800

First find the prime factors for 1800

$$1800 = 2 \times 2 \times 5 \times 5 \times 3 \times 3 \times 2$$

By grouping the prime factors in equal pairs we get,

$$= (2 \times 2) \times (5 \times 5) \times (3 \times 3) \times 2$$

By observation, prime factor 2 is left out.

So, divide by 2 to eliminate 2 we get,

$$1800/2 = (2 \times 2) \times (5 \times 5) \times (3 \times 3)$$

$$= (2 \times 5 \times 3) \times (2 \times 5 \times 3)$$

$$= 30 \times 30$$

$$= (30)^2$$

∴ Resultant is the square of 30.

(iii) 2904

First find the prime factors for 2904

$$2904 = 2 \times 2 \times 11 \times 11 \times 2 \times 3$$

By grouping the prime factors in equal pairs we get,

$$= (2 \times 2) \times (11 \times 11) \times 2 \times 3$$

By observation, prime factor 2 and 3 are left out.

So, divide by 6 to eliminate 2 and 3 we get,

$$2904/6 = (2 \times 2) \times (11 \times 11)$$

$$= (2 \times 11) \times (2 \times 11)$$

$$= 22 \times 22$$

$$= (22)^2$$

\therefore Resultant is the square of 22.

5. Which of the following numbers are perfect squares?

11, 12, 16, 32, 36, 50, 64, 79, 81, 111, 121

Solution:

11 it is a prime number by itself.

So it is not a perfect square.

12 is not a perfect square.

$$16 = (4)^2$$

16 is a perfect square.

32 is not a perfect square.

$$36 = (6)^2$$

36 is a perfect square.

50 is not a perfect square.

$$64 = (8)^2$$

64 is a perfect square.

79 it is a prime number.

So it is not a perfect square.

$$81 = (9)^2$$

81 is a perfect square.

RD Sharma Solutions for Class 8 Maths Chapter 3 –
Squares and Square Roots

111 it is a prime number.
So it is not a perfect square.

$121 = (11)^2$
121 is a perfect square.

6. Using prime factorization method, find which of the following numbers are perfect squares?

189, 225, 2048, 343, 441, 2961, 11025, 3549

Solution:

189 prime factors are
 $189 = 3^2 \times 3 \times 7$

Since it does not have equal pair of factors 189 is not a perfect square.

225 prime factors are
 $225 = (5 \times 5) \times (3 \times 3)$

Since 225 has equal pair of factors. \therefore It is a perfect square.

2048 prime factors are
 $2048 = (2 \times 2) \times (2 \times 2) \times (2 \times 2) \times (2 \times 2) \times (2 \times 2) \times 2$

Since it does not have equal pair of factors 2048 is not a perfect square.

343 prime factors are
 $343 = (7 \times 7) \times 7$

Since it does not have equal pair of factors 2048 is not a perfect square.

441 prime factors are
 $441 = (7 \times 7) \times (3 \times 3)$

Since 441 has equal pair of factors. \therefore It is a perfect square.

2961 prime factors are
 $2961 = (3 \times 3) \times (3 \times 3) \times (3 \times 3) \times (2 \times 2)$

Since 2961 has equal pair of factors. \therefore It is a perfect square.

11025 prime factors are
 $11025 = (3 \times 3) \times (5 \times 5) \times (7 \times 7)$

Since 11025 has equal pair of factors. \therefore It is a perfect square.

3549 prime factors are

$$3549 = (13 \times 13) \times 3 \times 7$$

Since it does not have equal pair of factors 3549 is not a perfect square.

7. By what number should each of the following numbers be multiplied to get a perfect square in each case? Also find the number whose square is the new number.

(i) 8820

(ii) 3675

(iii) 605

(iv) 2880

(v) 4056

(vi) 3468

(vii) 7776

Solution:

(i) 8820

First find the prime factors for 8820

$$8820 = 2 \times 2 \times 3 \times 3 \times 7 \times 7 \times 5$$

By grouping the prime factors in equal pairs we get,

$$= (2 \times 2) \times (3 \times 3) \times (7 \times 7) \times 5$$

By observation, prime factor 5 is left out.

So, multiply by 5 we get,

$$8820 \times 5 = (2 \times 2) \times (3 \times 3) \times (7 \times 7) \times (5 \times 5)$$

$$= (2 \times 3 \times 7 \times 5) \times (2 \times 3 \times 7 \times 5)$$

$$= 210 \times 210$$

$$= (210)^2$$

\therefore Product is the square of 210.

(ii) 3675

First find the prime factors for 3675

$$3675 = 5 \times 5 \times 7 \times 7 \times 3$$

By grouping the prime factors in equal pairs we get,

$$= (5 \times 5) \times (7 \times 7) \times 3$$

By observation, prime factor 3 is left out.

So, multiply by 3 we get,

$$3675 \times 3 = (5 \times 5) \times (7 \times 7) \times (3 \times 3)$$

$$= (5 \times 7 \times 3) \times (5 \times 7 \times 3)$$

$$= 105 \times 105$$

$$= (105)^2$$

\therefore Product is the square of 105.

RD Sharma Solutions for Class 8 Maths Chapter 3 –
Squares and Square Roots

(iii) 605

First find the prime factors for 605

$$605 = 5 \times 11 \times 11$$

By grouping the prime factors in equal pairs we get,
 $= (11 \times 11) \times 5$

By observation, prime factor 5 is left out.

So, multiply by 5 we get,

$$\begin{aligned} 605 \times 5 &= (11 \times 11) \times (5 \times 5) \\ &= (11 \times 5) \times (11 \times 5) \\ &= 55 \times 55 \\ &= (55)^2 \end{aligned}$$

\therefore Product is the square of 55.

(iv) 2880

First find the prime factors for 2880

$$2880 = 5 \times 3 \times 3 \times 2 \times 2 \times 2 \times 2 \times 2$$

By grouping the prime factors in equal pairs we get,
 $= (3 \times 3) \times (2 \times 2) \times (2 \times 2) \times (2 \times 2) \times 5$

By observation, prime factor 5 is left out.

So, multiply by 5 we get,

$$\begin{aligned} 2880 \times 5 &= (3 \times 3) \times (2 \times 2) \times (2 \times 2) \times (2 \times 2) \times (5 \times 5) \\ &= (3 \times 2 \times 2 \times 5) \times (3 \times 2 \times 2 \times 5) \\ &= 120 \times 120 \\ &= (120)^2 \end{aligned}$$

\therefore Product is the square of 120.

(v) 4056

First find the prime factors for 4056

$$4056 = 2 \times 2 \times 13 \times 13 \times 2 \times 3$$

By grouping the prime factors in equal pairs we get,
 $= (2 \times 2) \times (13 \times 13) \times 2 \times 3$

By observation, prime factors 2 and 3 are left out.

So, multiply by 6 we get,

$$\begin{aligned} 4056 \times 6 &= (2 \times 2) \times (13 \times 13) \times (2 \times 2) \times (3 \times 3) \\ &= (2 \times 13 \times 2 \times 3) \times (2 \times 13 \times 2 \times 3) \\ &= 156 \times 156 \\ &= (156)^2 \end{aligned}$$

\therefore Product is the square of 156.

(vi) 3468

First find the prime factors for 3468

$$3468 = 2 \times 2 \times 17 \times 17 \times 3$$

By grouping the prime factors in equal pairs we get,

$$= (2 \times 2) \times (17 \times 17) \times 3$$

By observation, prime factor 3 is left out.

So, multiply by 3 we get,

$$3468 \times 3 = (2 \times 2) \times (17 \times 17) \times (3 \times 3)$$

$$= (2 \times 17 \times 3) \times (2 \times 17 \times 3)$$

$$= 102 \times 102$$

$$= (102)^2$$

\therefore Product is the square of 102.

(vii) 7776

First find the prime factors for 7776

$$7776 = 2 \times 2 \times 2 \times 2 \times 3 \times 3 \times 3 \times 3 \times 2 \times 3$$

By grouping the prime factors in equal pairs we get,

$$= (2 \times 2) \times (2 \times 2) \times (3 \times 3) \times (3 \times 3) \times 2 \times 3$$

By observation, prime factors 2 and 3 are left out.

So, multiply by 6 we get,

$$7776 \times 6 = (2 \times 2) \times (2 \times 2) \times (3 \times 3) \times (3 \times 3) \times (2 \times 2) \times (3 \times 3)$$

$$= (2 \times 2 \times 3 \times 3 \times 2 \times 3) \times (2 \times 2 \times 3 \times 3 \times 2 \times 3)$$

$$= 216 \times 216$$

$$= (216)^2$$

\therefore Product is the square of 216.

8. By What numbers should each of the following be divided to get a perfect square in each case? Also, find the number whose square is the new number.

(i) 16562

(ii) 3698

(iii) 5103

(iv) 3174

(v) 1575

Solution:

(i) 16562

First find the prime factors for 16562

$$16562 = 7 \times 7 \times 13 \times 13 \times 2$$

By grouping the prime factors in equal pairs we get,

$$= (7 \times 7) \times (13 \times 13) \times 2$$

RD Sharma Solutions for Class 8 Maths Chapter 3 –
Squares and Square Roots

By observation, prime factor 2 is left out.

So, divide by 2 to eliminate 2 we get,

$$\begin{aligned}16562/2 &= (7 \times 7) \times (13 \times 13) \\&= (7 \times 13) \times (7 \times 13) \\&= 91 \times 91 \\&= (91)^2\end{aligned}$$

∴ Resultant is the square of 91.

(ii) 3698

First find the prime factors for 3698

$$3698 = 2 \times 43 \times 43$$

By grouping the prime factors in equal pairs we get,

$$= (43 \times 43) \times 2$$

By observation, prime factor 2 is left out.

So, divide by 2 to eliminate 2 we get,

$$\begin{aligned}3698/2 &= (43 \times 43) \\&= (43)^2\end{aligned}$$

∴ Resultant is the square of 43.

(iii) 5103

First find the prime factors for 5103

$$5103 = 3 \times 3 \times 3 \times 3 \times 3 \times 7$$

By grouping the prime factors in equal pairs we get,

$$= (3 \times 3) \times (3 \times 3) \times (3 \times 3) \times 7$$

By observation, prime factor 7 is left out.

So, divide by 7 to eliminate 7 we get,

$$\begin{aligned}5103/7 &= (3 \times 3) \times (3 \times 3) \times (3 \times 3) \\&= (3 \times 3 \times 3) \times (3 \times 3 \times 3) \\&= 27 \times 27 \\&= (27)^2\end{aligned}$$

∴ Resultant is the square of 27.

(iv) 3174

First find the prime factors for 3174

$$3174 = 2 \times 3 \times 23 \times 23$$

By grouping the prime factors in equal pairs we get,

$$= (23 \times 23) \times 2 \times 3$$

By observation, prime factor 2 and 3 are left out.

So, divide by 6 to eliminate 2 and 3 we get,

$$3174/6 = (23 \times 23) \\ = (23)^2$$

∴ Resultant is the square of 23.

(v) 1575

First find the prime factors for 1575

$$1575 = 3 \times 3 \times 5 \times 5 \times 7$$

By grouping the prime factors in equal pairs we get,

$$= (3 \times 3) \times (5 \times 5) \times 7$$

By observation, prime factor 7 is left out.

So, divide by 7 to eliminate 7 we get,

$$1575/7 = (3 \times 3) \times (5 \times 5)$$

$$= (3 \times 5) \times (3 \times 5)$$

$$= 15 \times 15$$

$$= (15)^2$$

∴ Resultant is the square of 15.

9. Find the greatest number of two digits which is a perfect square.

Solution:

We know that the two digit greatest number is 99

$$\begin{array}{r} 9 \\ 9 \overline{) 99} \\ \underline{81} \\ 18 \end{array}$$

∴ Greatest two digit perfect square number is $99 - 18 = 81$

10. Find the least number of three digits which is perfect square.

Solution:

We know that the three digit greatest number is 100

To find the square root of 100

$$\begin{array}{r} 10 \\ 1 \overline{) 100} \\ \underline{1} \\ 20 \end{array}$$

∴ the least number of three digits which is a perfect square is 100 itself.

11. Find the smallest number by which 4851 must be multiplied so that the product becomes a perfect square.

Solution:

RD Sharma Solutions for Class 8 Maths Chapter 3 –
Squares and Square Roots

First find the prime factors for 4851

$$4851 = 3 \times 3 \times 7 \times 7 \times 11$$

By grouping the prime factors in equal pairs we get,

$$= (3 \times 3) \times (7 \times 7) \times 11$$

∴ The smallest number by which 4851 must be multiplied so that the product becomes a perfect square is 11.

12. Find the smallest number by which 28812 must be divided so that the quotient becomes a perfect square.

Solution:

First find the prime factors for 28812

$$28812 = 2 \times 2 \times 3 \times 3 \times 3 \times 17 \times 17$$

By grouping the prime factors in equal pairs we get,

$$= (2 \times 2) \times (3 \times 3) \times (17 \times 17) \times 3$$

∴ The smallest number by which 28812 must be divided so that the quotient becomes a perfect square is 3.

13. Find the smallest number by which 1152 must be divided so that it becomes a perfect square. Also find the number whose square is the resulting number.

Solution:

First find the prime factors for 1152

$$1152 = 2 \times 2 \times 2 \times 2 \times 2 \times 2 \times 2 \times 3 \times 3$$

By grouping the prime factors in equal pairs we get,

$$= (2 \times 2) \times (2 \times 2) \times (2 \times 2) \times (3 \times 3) \times 2$$

∴ The smallest number by which 1152 must be divided so that the quotient becomes a perfect square is 2.

The number after division, $1152/2 = 576$

prime factors for 576 = $2 \times 2 \times 2 \times 2 \times 2 \times 2 \times 3 \times 3$

By grouping the prime factors in equal pairs we get,

$$= (2 \times 2) \times (2 \times 2) \times (2 \times 2) \times (3 \times 3)$$

$$= 2^6 \times 3^2$$

$$= 24^2$$

∴ The resulting number is the square of 24.

EXERCISE 3.2

PAGE NO: 3.18

1. The following numbers are not perfect squares. Give reason.

(i) 1547

(ii) 45743

(iii) 8948

(iv) 333333

Solution:

The numbers ending with 2, 3, 7 or 8 is not a perfect square.

So, (i) 1547

(ii) 45743

(iii) 8948

(iv) 333333

Are not perfect squares.

2. Show that the following numbers are not, perfect squares:

(i) 9327

(ii) 4058

(iii) 22453

(iv) 743522

Solution:

The numbers ending with 2, 3, 7 or 8 is not a perfect square.

So, (i) 9327

(ii) 4058

(iii) 22453

(iv) 743522

Are not perfect squares.

3. The square of which of the following numbers would be an odd number?

(i) 731

(ii) 3456

(iii) 5559

(iv) 42008

Solution:

We know that square of an even number is even number.

Square of an odd number is odd number.

(i) 731

Since 731 is an odd number, the square of the given number is also odd.

(ii) 3456

Since 3456 is an even number, the square of the given number is also even.

(iii) 5559

Since 5559 is an odd number, the square of the given number is also odd.

(iv) 42008

Since 42008 is an even number, the square of the given number is also even.

4. What will be the unit's digit of the squares of the following numbers?

(i) 52

(ii) 977

(iii) 4583

(iv) 78367

(v) 52698

(vi) 99880

(vii) 12796

(viii) 55555

(ix) 53924

Solution:

(i) 52

Unit digit of $(52)^2 = (2^2) = 4$

(ii) 977

Unit digit of $(977)^2 = (7^2) = 49 = 9$

(iii) 4583

Unit digit of $(4583)^2 = (3^2) = 9$

(iv) 78367

Unit digit of $(78367)^2 = (7^2) = 49 = 9$

(v) 52698

Unit digit of $(52698)^2 = (8^2) = 64 = 4$

(vi) 99880

Unit digit of $(99880)^2 = (0^2) = 0$

(vii) 12796

Unit digit of $(12796)^2 = (6^2) = 36 = 6$

(viii) 55555

Unit digit of $(55555)^2 = (5^2) = 25 = 5$

(ix) 53924

Unit digit of $(53924)^2 = (4^2) = 16 = 6$

5. Observe the following pattern

$$1+3 = 2^2$$

$$1+3+5 = 3^2$$

$$1+3+5+7 = 4^2$$

And write the value of $1+3+5+7+9+\dots$ up to n terms.

Solution:

We know that the pattern given is the square of the given number on the right hand side is equal to the sum of the given numbers on the left hand side.

\therefore The value of $1+3+5+7+9+\dots$ up to n terms $= n^2$ (as there are only n terms).

6. Observe the following pattern

$$2^2 - 1^2 = 2 + 1$$

$$3^2 - 2^2 = 3 + 2$$

$$4^2 - 3^2 = 4 + 3$$

$$5^2 - 4^2 = 5 + 4$$

And find the value of

(i) $100^2 - 99^2$

(ii) $111^2 - 109^2$

(iii) $99^2 - 96^2$

Solution:

(i) $100^2 - 99^2$

$$100 + 99 = 199$$

(ii) $111^2 - 109^2$

$$(111^2 - 110^2) + (110^2 - 109^2)$$

$$(111 + 110) + (100 + 109)$$

$$440$$

(iii) $99 - 96$

$$(99^2 - 98^2) + (98^2 - 97^2) + (97^2 - 96^2)$$

$$(99 + 98) + (98 + 97) + (97 + 96)$$

585

7. Which of the following triplets are Pythagorean?**(i) (8, 15, 17)****(ii) (18, 80, 82)****(iii) (14, 48, 51)****(iv) (10, 24, 26)****(v) (16, 63, 65)****(vi) (12, 35, 38)****Solution:****(i) (8, 15, 17)**

$$\text{LHS} = 8^2 + 15^2$$

$$= 289$$

$$\text{RHS} = 17^2$$

$$= 289$$

$$\text{LHS} = \text{RHS}$$

 \therefore The given triplet is a Pythagorean.**(ii) (18, 80, 82)**

$$\text{LHS} = 18^2 + 80^2$$

$$= 6724$$

$$\text{RHS} = 82^2$$

$$= 6724$$

$$\text{LHS} = \text{RHS}$$

 \therefore The given triplet is a Pythagorean.**(iii) (14, 48, 51)**

$$\text{LHS} = 14^2 + 48^2$$

$$= 2500$$

$$\text{RHS} = 51^2$$

$$= 2601$$

$$\text{LHS} \neq \text{RHS}$$

 \therefore The given triplet is not a Pythagorean.**(iv) (10, 24, 26)**

$$\text{LHS} = 10^2 + 24^2$$

$$= 676$$

$$\text{RHS} = 26^2$$

$$= 676$$

$$\text{LHS} = \text{RHS}$$

∴ The given triplet is a Pythagorean.

(v) (16, 63, 65)

$$\text{LHS} = 16^2 + 63^2$$

$$= 4225$$

$$\text{RHS} = 65^2$$

$$= 4225$$

$$\text{LHS} = \text{RHS}$$

∴ The given triplet is a Pythagorean.

(vi) (12, 35, 38)

$$\text{LHS} = 12^2 + 35^2$$

$$= 1369$$

$$\text{RHS} = 38^2$$

$$= 1444$$

$$\text{LHS} \neq \text{RHS}$$

∴ The given triplet is not a Pythagorean.

8. Observe the following pattern

$$(1 \times 2) + (2 \times 3) = (2 \times 3 \times 4)/3$$

$$(1 \times 2) + (2 \times 3) + (3 \times 4) = (3 \times 4 \times 5)/3$$

$$(1 \times 2) + (2 \times 3) + (3 \times 4) + (4 \times 5) = (4 \times 5 \times 6)/3$$

And find the value of

$$(1 \times 2) + (2 \times 3) + (3 \times 4) + (4 \times 5) + (5 \times 6)$$

Solution:

$$(1 \times 2) + (2 \times 3) + (3 \times 4) + (4 \times 5) + (5 \times 6) = (5 \times 6 \times 7)/3 = 70$$

9. Observe the following pattern

$$1 = 1/2 (1 \times (1+1))$$

$$1+2 = 1/2 (2 \times (2+1))$$

$$1+2+3 = 1/2 (3 \times (3+1))$$

$$1+2+3+4 = 1/2 (4 \times (4+1))$$

And find the values of each of the following:

(i) $1+2+3+4+5+\dots+50$

(ii) $31+32+\dots+50$

Solution:

We know that R.H.S = $\frac{1}{2}$ [No. of terms in L.H.S \times (No. of terms + 1)] (if only when L.H.S starts with 1)

$$(i) 1+2+3+4+5+\dots+50 = \frac{1}{2} (5 \times (5+1))$$

$$25 \times 51 = 1275$$

$$(ii) 31+32+\dots+50 = (1+2+3+4+5+\dots+50) - (1+2+3+\dots+30)$$

$$1275 - \frac{1}{2} (30 \times (30+1))$$

$$1275 - 465$$

$$810$$

10. Observe the following pattern

$$1^2 = \frac{1}{6} (1 \times (1+1) \times (2 \times 1+1))$$

$$1^2+2^2 = \frac{1}{6} (2 \times (2+1) \times (2 \times 2+1))$$

$$1^2+2^2+3^2 = \frac{1}{6} (3 \times (3+1) \times (2 \times 3+1))$$

$$1^2+2^2+3^2+4^2 = \frac{1}{6} (4 \times (4+1) \times (2 \times 4+1))$$

And find the values of each of the following:

$$(i) 1^2+2^2+3^2+4^2+\dots+10^2$$

$$(ii) 5^2+6^2+7^2+8^2+9^2+10^2+11^2+12^2$$

Solution:

$$\text{RHS} = \frac{1}{6} [(\text{No. of terms in L.H.S}) \times (\text{No. of terms} + 1) \times (2 \times \text{No. of terms} + 1)]$$

$$(i) 1^2+2^2+3^2+4^2+\dots+10^2 = \frac{1}{6} (10 \times (10+1) \times (2 \times 10+1))$$

$$= \frac{1}{6} (2310)$$

$$= 385$$

$$(ii) 5^2+6^2+7^2+8^2+9^2+10^2+11^2+12^2 = 1^2+2^2+3^2+\dots+12^2 - (1^2+2^2+3^2+4^2)$$

$$\frac{1}{6} (12 \times (12+1) \times (2 \times 12+1)) - \frac{1}{6} (4 \times (4+1) \times (2 \times 4+1))$$

$$650-30$$

$$620$$

11. Which of the following numbers are squares of even numbers?

121, 225, 256, 324, 1296, 6561, 5476, 4489, 373758

Solution:

We know that only even numbers be the squares of even numbers.

So, 256, 324, 1296, 5476, 373758 are even numbers, since 373758 is not a perfect square

\therefore 256, 324, 1296, 5476 are squares of even numbers.

12. By just examining the units digits, can you tell which of the following cannot be whole squares?

(i) 1026

(ii) 1028

(iii) 1024

(iv) 1022

(v) 1023

(vi) 1027

Solution:

We know that numbers ending with 2, 3, 7, 8 cannot be a perfect square.

\therefore 1028, 1022, 1023, and 1027 cannot be whole squares.

13. Which of the numbers for which you cannot decide whether they are squares.

Solution:

We know that the natural numbers such as 0, 1, 4, 5, 6 or 9 cannot be decided surely whether they are squares or not.

14. Write five numbers which you cannot decide whether they are square just by looking at the unit's digit.

Solution:

We know that any natural number ending with 0, 1, 4, 5, 6 or 9 can be or cannot be a square number.

Here are the five examples which you cannot decide whether they are square or not just by looking at the units place:

(i) 2061

The unit digit is 1. So, it may or may not be a square number

(ii) 1069

The unit digit is 9. So, it may or may not be a square number

(iii) 1234

The unit digit is 4. So, it may or may not be a square number

(iv) 56790

The unit digit is 0. So, it may or may not be a square number

(v) 76555

The unit digit is 5. So, it may or may not be a square number

15. Write true (T) or false (F) for the following statements.

(i) The number of digits in a square number is even.

- (ii) The square of a prime number is prime.
- (iii) The sum of two square numbers is a square number.
- (iv) The difference of two square numbers is a square number.
- (v) The product of two square numbers is a square number.
- (vi) No square number is negative.
- (vii) There is no square number between 50 and 60.
- (viii) There are fourteen square number up to 200.

Solution:

- (i) False, because 169 is a square number with odd digit.
- (ii) False, because square of 3(which is prime) is 9(which is not prime).
- (iii) False, because sum of 2^2 and 3^2 is 13 which is not square number.
- (iv) False, because difference of 3^2 and 2^2 is 5, which is not square number.
- (v) True, because the square of 2^2 and 3^2 is 36 which is square of 6
- (vi) True, because $(-2)^2$ is 4, which is not negative.
- (vii) True, because as there is no square number between them.
- (viii) True, because the fourteen numbers up to 200 are: 1, 4, 9, 16, 25, 36, 49, 64, 81, 100, 121, 144, 169, 196.

EXERCISE 3.3

PAGE NO: 3.32

1. Find the squares of the following numbers using column method. Verify the result by finding the square using the usual multiplication:

(i) 25

(ii) 37

(iii) 54

(iv) 71

(v) 96

Solution:

(i) 25

So here, $a = 2$ and $b = 5$

Column I	Column II	Column III
a^2	$2ab$	b^2
4	20	25
+2	+2	
6	22	
6	2	5

$$\therefore 25^2 = 625$$

Where, it can be expressed as

$$25^2 = 25 \times 25 = 625$$

(ii) 37

So here, $a = 3$ and $b = 7$

Column I	Column II	Column III
a^2	$2ab$	b^2
9	42	49
+4	+4	
13	46	
13	6	9

$$\therefore 37^2 = 1369$$

Where, it can be expressed as

$$37^2 = 37 \times 37 = 1369$$

(iii) 54

So here, $a = 5$ and $b = 4$

Column I	Column II	Column III
a^2	$2ab$	b^2
25	40	16
+4	+1	
29	41	
29	1	6

$$\therefore 54^2 = 2916$$

Where, it can be expressed as

$$54^2 = 54 \times 54 = 2916$$

(iv) 71

So here, $a = 7$ and $b = 1$

Column I	Column II	Column III
a^2	$2ab$	b^2
49	14	01
+1	+0	
49	14	
49	4	1

$$\therefore 71^2 = 4941$$

Where, it can be expressed as

$$71^2 = 71 \times 71 = 4941$$

(v) 96

So here, $a = 9$ and $b = 6$

Column I	Column II	Column III
a^2	$2ab$	b^2
81	108	36
+11	+3	
92	111	
92	1	6

$$\therefore 96^2 = 9216$$

RD Sharma Solutions for Class 8 Maths Chapter 3 –
Squares and Square Roots

Where, it can be expressed as

$$96^2 = 96 \times 96 = 9216$$

2. Find the squares of the following numbers using diagonal method:

(i) 98

(ii) 273

(iii) 348

(iv) 295

(v) 171

Solution:

(i) 98

Step 1: Obtain the number and count the number of digits in it. Let there be n digits in the number to be squared.

Step 2: Draw square and divide it into n^2 sub-squares of the same size by drawing $(n - 1)$ horizontal and $(n - 1)$ vertical lines.

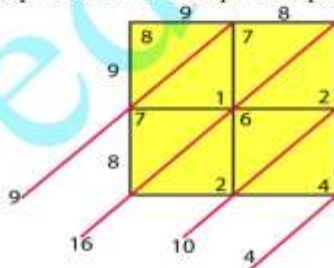
Step 3: Draw the diagonals of each sub-square.

Step 4: Write the digits of the number to be squared along left vertical side and top horizontal side of the squares.

Step 5: Multiply each digit on the left of the square with each digit on top of the column one-by-one. Write the units digit of the product below the diagonal and tens digit above the diagonal of the corresponding sub-square.

Step 6: Starting below the lowest diagonal sum the digits along the diagonals so obtained. Write the units digit of the sum and take carry, the tens digit (if any) to the diagonal above.

Step 7: Obtain the required square by writing the digits from the left-most side.



RD Sharma Solutions for Class 8 Maths Chapter 3 – Squares and Square Roots

$$\therefore 98^2 = 9604$$

(ii) 273

Step 1: Obtain the number and count the number of digits in it. Let there be n digits in the number to be squared.

Step 2: Draw square and divide it into n^2 sub-squares of the same size by drawing $(n - 1)$ horizontal and $(n - 1)$ vertical lines.

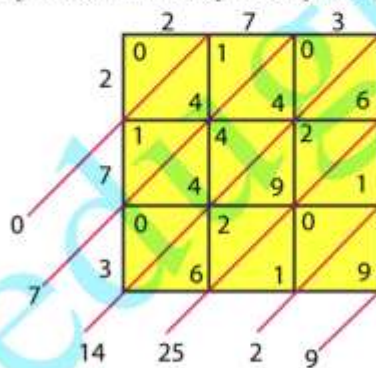
Step 3: Draw the diagonals of each sub-square.

Step 4: Write the digits of the number to be squared along left vertical side and top horizontal side of the squares.

Step 5: Multiply each digit on the left of the square with each digit on top of the column one-by-one. Write the units digit of the product below the diagonal and tens digit above the diagonal of the corresponding sub-square.

Step 6: Starting below the lowest diagonal sum the digits along the diagonals so obtained. Write the units digit of the sum and take carry, the tens digit (if any) to the diagonal above.

Step 7: Obtain the required square by writing the digits from the left-most side.



$$\therefore 273^2 = 74529$$

RD Sharma Solutions for Class 8 Maths Chapter 3 – Squares and Square Roots

(iii) 348

Step 1: Obtain the number and count the number of digits in it. Let there be n digits in the number to be squared.

Step 2: Draw square and divide it into n^2 sub-squares of the same size by drawing $(n - 1)$ horizontal and $(n - 1)$ vertical lines.

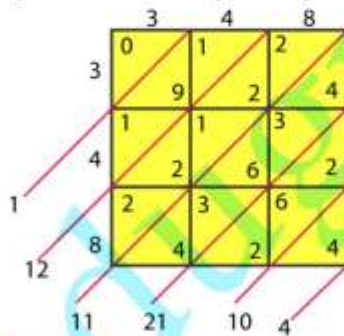
Step 3: Draw the diagonals of each sub-square.

Step 4: Write the digits of the number to be squared along left vertical side and top horizontal side of the squares.

Step 5: Multiply each digit on the left of the square with each digit on top of the column one-by-one. Write the units digit of the product below the diagonal and tens digit above the diagonal of the corresponding sub-square.

Step 6: Starting below the lowest diagonal sum the digits along the diagonals so obtained. Write the units digit of the sum and take carry, the tens digit (if any) to the diagonal above.

Step 7: Obtain the required square by writing the digits from the left-most side.



$$\therefore 348^2 = 121104$$

(iv) 295

Step 1: Obtain the number and count the number of digits in it. Let there be n digits in the number to be squared.

RD Sharma Solutions for Class 8 Maths Chapter 3 – Squares and Square Roots

Step 2: Draw square and divide it into n^2 sub-squares of the same size by drawing $(n - 1)$ horizontal and $(n - 1)$ vertical lines.

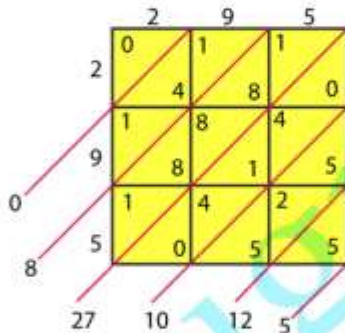
Step 3: Draw the diagonals of each sub-square.

Step 4: Write the digits of the number to be squared along left vertical side and top horizontal side of the squares.

Step 5: Multiply each digit on the left of the square with each digit on top of the column one-by-one. Write the units digit of the product below the diagonal and tens digit above the diagonal of the corresponding sub-square.

Step 6: Starting below the lowest diagonal sum the digits along the diagonals so obtained. Write the units digit of the sum and take carry, the tens digit (if any) to the diagonal above.

Step 7: Obtain the required square by writing the digits from the left-most side.



$$\therefore 295^2 = 87025$$

(v) 171

Step 1: Obtain the number and count the number of digits in it. Let there be n digits in the number to be squared.

Step 2: Draw square and divide it into n^2 sub-squares of the same size by drawing $(n - 1)$ horizontal and $(n - 1)$ vertical lines.

Step 3: Draw the diagonals of each sub-square.

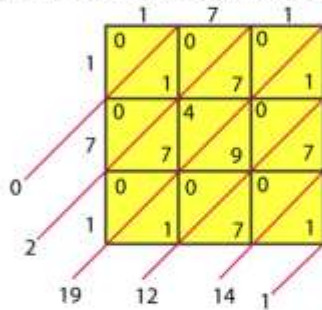
RD Sharma Solutions for Class 8 Maths Chapter 3 –
Squares and Square Roots

Step 4: Write the digits of the number to be squared along left vertical side and top horizontal side of the squares.

Step 5: Multiply each digit on the left of the square with each digit on top of the column one-by-one. Write the units digit of the product below the diagonal and tens digit above the diagonal of the corresponding sub-square.

Step 6: Starting below the lowest diagonal sum the digits along the diagonals so obtained. Write the units digit of the sum and take carry, the tens digit (if any) to the diagonal above.

Step 7: Obtain the required square by writing the digits from the left-most side.



$$\therefore 171^2 = 29241$$

3. Find the squares of the following numbers:

(i) 127

(ii) 503

(iii) 450

(iv) 862

(v) 265

Solution:

(i) 127

$$127^2 = 127 \times 127 = 16129$$

(ii) 503

$$503^2 = 503 \times 503 = 253009$$

RD Sharma Solutions for Class 8 Maths Chapter 3 –
Squares and Square Roots

(iii) 450

$$450^2 = 450 \times 450 = 203401$$

(iv) 862

$$862^2 = 862 \times 862 = 743044$$

(v) 265

$$265^2 = 265 \times 265 = 70225$$

4. Find the squares of the following numbers:

(i) 425

(ii) 575

(iii) 405

(iv) 205

(v) 95

(vi) 745

(vii) 512

(viii) 995

Solution:

(i) 425

$$425^2 = 425 \times 425 = 180625$$

(ii) 575

$$575^2 = 575 \times 575 = 330625$$

(iii) 405

$$405^2 = 405 \times 405 = 164025$$

(iv) 205

$$205^2 = 205 \times 205 = 42025$$

(v) 95

$$95^2 = 95 \times 95 = 9025$$

(vi) 745

$$745^2 = 745 \times 745 = 555025$$

(vii) 512

$$512^2 = 512 \times 512 = 262144$$

(viii) 995

$$995^2 = 995 \times 995 = 990025$$

5. Find the squares of the following numbers using the identity $(a+b)^2 = a^2 + 2ab + b^2$:

(i) 405

(ii) 510

(iii) 1001

(iv) 209

(v) 605

Solution:

(i) 405

$$\text{We know, } (a+b)^2 = a^2 + 2ab + b^2$$

$$\begin{aligned} 405 &= (400+5)^2 \\ &= (400)^2 + 5^2 + 2(400)(5) \\ &= 160000 + 25 + 4000 \\ &= 164025 \end{aligned}$$

(ii) 510

$$\text{We know, } (a+b)^2 = a^2 + 2ab + b^2$$

$$\begin{aligned} 510 &= (500+10)^2 \\ &= (500)^2 + 10^2 + 2(500)(10) \\ &= 250000 + 100 + 10000 \\ &= 260100 \end{aligned}$$

(iii) 1001

$$\text{We know, } (a+b)^2 = a^2 + 2ab + b^2$$

$$\begin{aligned} 1001 &= (1000+1)^2 \\ &= (1000)^2 + 1^2 + 2(1000)(1) \\ &= 1000000 + 1 + 2000 \\ &= 1002001 \end{aligned}$$

(iv) 209

$$\text{We know, } (a+b)^2 = a^2 + 2ab + b^2$$

$$\begin{aligned} 209 &= (200+9)^2 \\ &= (200)^2 + 9^2 + 2(200)(9) \\ &= 40000 + 81 + 3600 \\ &= 43681 \end{aligned}$$

(v) 605

RD Sharma Solutions for Class 8 Maths Chapter 3 –
Squares and Square Roots

We know, $(a+b)^2 = a^2 + 2ab + b^2$
 $605 = (600+5)^2$
 $= (600)^2 + 5^2 + 2(600)(5)$
 $= 360000 + 25 + 6000$
 $= 366025$

6. Find the squares of the following numbers using the identity $(a-b)^2 = a^2 - 2ab + b^2$

(i) 395

(ii) 995

(iii) 495

(iv) 498

(v) 99

(vi) 999

(vii) 599

Solution:

(i) 395

We know, $(a-b)^2 = a^2 - 2ab + b^2$
 $395 = (400-5)^2$
 $= (400)^2 + 5^2 - 2(400)(5)$
 $= 160000 + 25 - 4000$
 $= 156025$

(ii) 995

We know, $(a-b)^2 = a^2 - 2ab + b^2$
 $995 = (1000-5)^2$
 $= (1000)^2 + 5^2 - 2(1000)(5)$
 $= 1000000 + 25 - 10000$
 $= 990025$

(iii) 495

We know, $(a-b)^2 = a^2 - 2ab + b^2$
 $495 = (500-5)^2$
 $= (500)^2 + 5^2 - 2(500)(5)$
 $= 250000 + 25 - 5000$
 $= 245025$

(iv) 498

We know, $(a-b)^2 = a^2 - 2ab + b^2$
 $498 = (500-2)^2$

RD Sharma Solutions for Class 8 Maths Chapter 3 –
Squares and Square Roots

$$\begin{aligned} &= (500)^2 + 2^2 - 2 (500) (2) \\ &= 250000 + 4 - 2000 \\ &= 248004 \end{aligned}$$

(v) 99

We know, $(a-b)^2 = a^2 - 2ab + b^2$

$$\begin{aligned} 99 &= (100-1)^2 \\ &= (100)^2 + 1^2 - 2 (100) (1) \\ &= 10000 + 1 - 200 \\ &= 9801 \end{aligned}$$

(vi) 999

We know, $(a-b)^2 = a^2 - 2ab + b^2$

$$\begin{aligned} 999 &= (1000-1)^2 \\ &= (1000)^2 + 1^2 - 2 (1000) (1) \\ &= 1000000 + 1 - 2000 \\ &= 998001 \end{aligned}$$

(vii) 599

We know, $(a-b)^2 = a^2 - 2ab + b^2$

$$\begin{aligned} 599 &= (600-1)^2 \\ &= (600)^2 + 1^2 - 2 (600) (1) \\ &= 360000 + 1 - 1200 \\ &= 358801 \end{aligned}$$

7. Find the squares of the following numbers by visual method:

(i) 52

(ii) 95

(iii) 505

(iv) 702

(v) 99

Solution:

(i) 52

We know, $(a+b)^2 = a^2 + 2ab + b^2$

$$\begin{aligned} 52 &= (50+2)^2 \\ &= (50)^2 + 2^2 + 2 (50) (2) \\ &= 2500 + 4 + 200 \\ &= 2704 \end{aligned}$$

RD Sharma Solutions for Class 8 Maths Chapter 3 –
Squares and Square Roots**(ii) 95**We know, $(a-b)^2 = a^2 - 2ab + b^2$

$$\begin{aligned} 95 &= (100-5)^2 \\ &= (100)^2 + 5^2 - 2(100)(5) \\ &= 10000 + 25 - 1000 \\ &= 9025 \end{aligned}$$

(iii) 505We know, $(a+b)^2 = a^2 + 2ab + b^2$

$$\begin{aligned} 505 &= (500+5)^2 \\ &= (500)^2 + 5^2 + 2(500)(5) \\ &= 250000 + 25 + 5000 \\ &= 255025 \end{aligned}$$

(iv) 702We know, $(a+b)^2 = a^2 + 2ab + b^2$

$$\begin{aligned} 702 &= (700+2)^2 \\ &= (700)^2 + 2^2 + 2(700)(2) \\ &= 490000 + 4 + 2800 \\ &= 492804 \end{aligned}$$

(v) 99We know, $(a-b)^2 = a^2 - 2ab + b^2$

$$\begin{aligned} 99 &= (100-1)^2 \\ &= (100)^2 + 1^2 - 2(100)(1) \\ &= 10000 + 1 - 200 \\ &= 9801 \end{aligned}$$

EXERCISE 3.4

PAGE NO: 3.38

1. Write the possible unit's digits of the square root of the following numbers. Which of these numbers are odd square roots?

(i) 9801

(ii) 99856

(iii) 998001

(iv) 657666025

Solution:

(i) 9801

We know that unit digit of 9801 is 1

Unit digit of square root = 1 or 9

Since the number is odd, square root is also odd

(ii) 99856

We know that unit digit of 99856 = 6

Unit digit of square root = 4 or 6

Since the number is even, square root is also even

(iii) 998001

We know that unit digit of 998001 = 1

Unit digit of square root = 1 or 9

Since the number is odd, square root is also odd

(iv) 657666025

We know that unit digit of 657666025 = 5

Unit digit of square root = 5

Since the number is odd, square root is also odd

2. Find the square root of each of the following by prime factorization.

(i) 441 (ii) 196

(iii) 529 (iv) 1764

(v) 1156 (vi) 4096

(vii) 7056 (viii) 8281

(ix) 11664 (x) 47089

(xi) 24336 (xii) 190969

(xiii) 586756 (xiv) 27225

(xv) 3013696

Solution:

RD Sharma Solutions for Class 8 Maths Chapter 3 –
Squares and Square Roots**(i) 441**

Firstly let's find the prime factors for

$$441 = 3 \times 3 \times 7 \times 7$$

$$= 3^2 \times 7^2$$

$$\sqrt{441} = 3 \times 7$$

$$= 21$$

(ii) 196

Firstly let's find the prime factors for

$$196 = 2 \times 2 \times 7 \times 7$$

$$= 2^2 \times 7^2$$

$$\sqrt{196} = 2 \times 7$$

$$= 14$$

(iii) 529

Firstly let's find the prime factors for

$$529 = 23 \times 23$$

$$= 23^2$$

$$\sqrt{529} = 23$$

(iv) 1764

Firstly let's find the prime factors for

$$1764 = 2 \times 2 \times 3 \times 3 \times 7 \times 7$$

$$= 2^2 \times 3^2 \times 7^2$$

$$\sqrt{1764} = 2 \times 3 \times 7$$

$$= 42$$

(v) 1156

Firstly let's find the prime factors for

$$1156 = 2 \times 2 \times 17 \times 17$$

$$= 2^2 \times 17^2$$

$$\sqrt{1156} = 2 \times 17$$

$$= 34$$

(vi) 4096

Firstly let's find the prime factors for

$$4096 = 2 \times 2 \times 2 \times 2 \times 2 \times 2 \times 2 \times 2 \times 2 \times 2 \times 2 \times 2$$

$$= 2^{12}$$

$$\sqrt{4096} = 2^6$$

RD Sharma Solutions for Class 8 Maths Chapter 3 –
Squares and Square Roots

$$= 64$$

(vii) 7056

Firstly let's find the prime factors for

$$\begin{aligned} 7056 &= 2 \times 2 \times 2 \times 2 \times 21 \times 21 \\ &= 2^2 \times 2^2 \times 21^2 \end{aligned}$$

$$\begin{aligned} \sqrt{7056} &= 2 \times 2 \times 21 \\ &= 84 \end{aligned}$$

(viii) 8281

Firstly let's find the prime factors for

$$\begin{aligned} 8281 &= 91 \times 91 \\ &= 91^2 \end{aligned}$$

$$\sqrt{8281} = 91$$

(ix) 11664

Firstly let's find the prime factors for

$$\begin{aligned} 11664 &= 2 \times 2 \times 2 \times 2 \times 3 \times 3 \times 3 \times 3 \times 3 \\ &= 2^2 \times 2^2 \times 3^2 \times 3^2 \times 3^2 \end{aligned}$$

$$\begin{aligned} \sqrt{11664} &= 2 \times 2 \times 3 \times 3 \times 3 \\ &= 108 \end{aligned}$$

(x) 47089

Firstly let's find the prime factors for

$$\begin{aligned} 47089 &= 217 \times 217 \\ &= 217^2 \end{aligned}$$

$$\sqrt{47089} = 217$$

(xi) 24336

Firstly let's find the prime factors for

$$\begin{aligned} 24336 &= 2 \times 2 \times 2 \times 2 \times 3 \times 3 \times 13 \times 13 \\ &= 2^2 \times 2^2 \times 3^2 \times 13^2 \end{aligned}$$

$$\begin{aligned} \sqrt{24336} &= 2 \times 2 \times 3 \times 13 \\ &= 156 \end{aligned}$$

(xii) 190969

Firstly let's find the prime factors for

$$\begin{aligned} 190969 &= 23 \times 23 \times 19 \times 19 \\ &= 23^2 \times 19^2 \end{aligned}$$

RD Sharma Solutions for Class 8 Maths Chapter 3 –
Squares and Square Roots

$$\begin{aligned}\sqrt{190969} &= 23 \times 19 \\ &= 437\end{aligned}$$

(xiii) 586756

Firstly let's find the prime factors for

$$\begin{aligned}586756 &= 2 \times 2 \times 383 \times 383 \\ &= 2^2 \times 383^2\end{aligned}$$

$$\begin{aligned}\sqrt{586756} &= 2 \times 383 \\ &= 766\end{aligned}$$

(xiv) 27225

Firstly let's find the prime factors for

$$\begin{aligned}27225 &= 5 \times 5 \times 3 \times 3 \times 11 \times 11 \\ &= 5^2 \times 3^2 \times 11^2\end{aligned}$$

$$\begin{aligned}\sqrt{27225} &= 5 \times 3 \times 11 \\ &= 165\end{aligned}$$

(xv) 3013696

Firstly let's find the prime factors for

$$\begin{aligned}3013696 &= 2 \times 2 \times 2 \times 2 \times 2 \times 2 \times 217 \times 217 \\ &= 2^6 \times 217^2\end{aligned}$$

$$\begin{aligned}\sqrt{3013696} &= 2^3 \times 217 \\ &= 1736\end{aligned}$$

3. Find the smallest number by which 180 must be multiplied so that it becomes a perfect square. Also, find the square root of the perfect square so obtained.

Solution:

Firstly let's find the prime factors for

$$\begin{aligned}180 &= (2 \times 2) \times (3 \times 3) \times 5 \\ &= 2^2 \times 3^2 \times 5\end{aligned}$$

To make the unpaired 5 into paired, multiply the number with 5

$$180 \times 5 = 2^2 \times 3^2 \times 5^2$$

$$\begin{aligned}\therefore \text{Square root of } \sqrt{(180 \times 5)} &= 2 \times 3 \times 5 \\ &= 30\end{aligned}$$

4. Find the smallest number by which 147 must be multiplied so that it becomes a perfect square. Also, find the square root of the number so obtained.

Solution:

Firstly let's find the prime factors for

RD Sharma Solutions for Class 8 Maths Chapter 3 –
Squares and Square Roots

$$147 = (7 \times 7) \times 3 \\ = 7^2 \times 3$$

To make the unpaired 3 into paired, multiply the number with 3

$$147 \times 3 = 7^2 \times 3^2$$

$$\therefore \text{Square root of } \sqrt{(147 \times 3)} = 7 \times 3 \\ = 21$$

5. Find the smallest number by which 3645 must be divided so that it becomes a perfect square. Also, find the square root of the resulting number.

Solution:

Firstly let's find the prime factors for

$$3645 = (3 \times 3) \times (3 \times 3) \times 5 \times 3 \\ = 3^2 \times 3^2 \times 5 \times 3$$

To make the unpaired 5 and 3 into paired, the number 3645 has to be divided by $5 \times 3 = 15$

$$3645 \div 15 = 3^2 \times 3^2$$

$$\therefore \text{Square root of } \sqrt{(3645 \div 15)} = 3 \times 3 \\ = 9$$

6. Find the smallest number by which 1152 must be divided so that it becomes a square. Also, find the square root of the number so obtained.

Solution:

Firstly let's find the prime factors for

$$1152 = (2 \times 2) \times (2 \times 2) \times (2 \times 2) \times 2 \times (3 \times 3) \\ = 2^2 \times 2^2 \times 2^2 \times 3^2 \times 2$$

To make the unpaired 2 into paired, the number 1152 has to be divided by 2

$$1152 \div 2 = 2^2 \times 2^2 \times 2^2 \times 3^2$$

$$\therefore \text{Square root of } \sqrt{(1152 \div 2)} = 2 \times 2 \times 2 \times 3 \\ = 24$$

7. The product of two numbers is 1296. If one number is 16 times the other, find the numbers.

Solution:

Let us consider two numbers a and b

So we know that one of the number, $a = 16b$

$$a \times b = 1296$$

$$16b \times b = 1296$$

$$16b^2 = 1296$$

$$b^2 = 1296/16 = 81$$

$$b = 9$$

RD Sharma Solutions for Class 8 Maths Chapter 3 –
Squares and Square Roots

$$\begin{aligned}a &= 16b \\&= 16(9) \\&= 144 \\ \therefore a &= 144 \text{ and } b = 9\end{aligned}$$

8. A welfare association collected Rs 202500 as donation from the residents. If each paid as many rupees as there were residents, find the number of residents.

Solution:

Let us consider total residents as a

So, each paid Rs. a

$$\text{Total collection} = a(a) = a^2$$

We know that the total Collection = 202500

$$a = \sqrt{202500}$$

$$a = \sqrt{2 \times 2 \times 3 \times 3 \times 3 \times 3 \times 5 \times 5 \times 5 \times 5}$$

$$= 2 \times 3 \times 3 \times 5 \times 5$$

$$= 450$$

$$\therefore \text{Total residents} = 450$$

9. A society collected Rs 92.16. Each member collected as many paise as there were members. How many members were there and how much did each contribute?

Solution:

Let us consider there were few members, each attributed a paise

$a(a)$, i.e. total cost collected = 9216 paise

$$a^2 = 9216$$

$$a = \sqrt{9216}$$

$$= 2 \times 2 \times 2 \times 12$$

$$= 96$$

$$\therefore \text{There were 96 members in the society and each contributed 96 paise}$$

10. A society collected Rs 2304 as fees from its students. If each student paid as many paise as there were students in the school, how many students were therein the school?

Solution:

Let us consider number of school students as a

each student contributed a paise

Total money obtained = a^2 paise

$$= 230400 \text{ paise}$$

$$a = \sqrt{230400}$$

$$= \sqrt{2304} \times \sqrt{100}$$

$$= 10\sqrt{2304}$$

$$a = 10 \times 2 \times 2 \times 12$$

$$a = 480$$

∴ There were 480 students in the school

11. The area of a square field is 5184 m^2 . A rectangular field, whose length is twice its breadth has its perimeter equal to the perimeter of the square field. Find the area of the rectangular field.

Solution:

Let us consider the side of square field as a

$$a^2 = 5184 \text{ m}^2$$

$$a = \sqrt{5184} \text{ m}$$

$$a = 2 \times 2 \times 2 \times 9$$

$$= 72 \text{ m}$$

$$\text{Perimeter of square} = 4a$$

$$= 4(72)$$

$$= 288 \text{ m}$$

$$\text{Perimeter of rectangle} = 2(l + b) = \text{perimeter of the square field}$$

$$= 288 \text{ m}$$

$$2(2b + b) = 288$$

$$b = 48 \text{ and } l = 96$$

$$\text{Area of rectangle} = 96 \times 48 \text{ m}^2$$

$$= 4608 \text{ m}^2$$

12. Find the least square number, exactly divisible by each one of the numbers: (i) 6, 9, 15 and 20 (ii) 8, 12, 15 and 20

Solution:

(i) 6, 9, 15 and 20

Firstly take L.C.M for 6, 9, 15, 20 which is 180

So the prime factors of $180 = 2^2 \times 3^2 \times 5$

To make it a perfect square, we have to multiply the number with 5

$$180 \times 5 = 2^2 \times 3^2 \times 5^2$$

∴ 900 is the least square number divisible by 6, 9, 15 and 20

(ii) 8, 2, 15 and 20

Firstly take L.C.M for 8, 2, 15, 20 which is 360

So the prime factors of $360 = 2^2 \times 3^2 \times 2 \times 5$

To make it a perfect square, we have to multiply the number with $2 \times 5 = 10$

RD Sharma Solutions for Class 8 Maths Chapter 3 –
Squares and Square Roots

$$360 \times 10 = 2^2 \times 3^2 \times 5^2 \times 2^2$$

\therefore 3600 is the least square number divisible by 8, 12, 15 and 20

13. Find the square roots of 121 and 169 by the method of repeated subtraction.

Solution:

Let us find the square roots of 121 and 169 by the method of repeated subtraction

$$121 - 1 = 120$$

$$120 - 3 = 117$$

$$117 - 5 = 112$$

$$112 - 7 = 105$$

$$105 - 9 = 96$$

$$96 - 11 = 85$$

$$85 - 13 = 72$$

$$72 - 15 = 57$$

$$57 - 17 = 40$$

$$40 - 19 = 21$$

$$21 - 21 = 0$$

Clearly, we have performed operation 11 times

$$\therefore \sqrt{121} = 11$$

$$169 - 1 = 168$$

$$168 - 3 = 165$$

$$165 - 5 = 160$$

$$160 - 7 = 153$$

$$153 - 9 = 144$$

$$144 - 11 = 133$$

$$133 - 13 = 120$$

$$120 - 15 = 105$$

$$105 - 17 = 88$$

$$88 - 19 = 69$$

$$69 - 21 = 48$$

$$48 - 23 = 25$$

$$25 - 25 = 0$$

Clearly, we have performed subtraction 13 times

$$\therefore \sqrt{169} = 13$$

14. Write the prime factorization of the following numbers and hence find their square roots.

(i) 7744

(ii) 9604

(iii) 5929

(iv) 7056

Solution:

(i) 7744

Prime factors of 7744 is

$$7744 = 2^2 \times 2^2 \times 2^2 \times 11^2$$

∴ The square root of 7744 is

$$\begin{aligned}\sqrt{7744} &= 2 \times 2 \times 2 \times 11 \\ &= 88\end{aligned}$$

(ii) 9604

Prime factors of 9604 is

$$9604 = 2^2 \times 7^2 \times 7^2$$

∴ The square root of 9604 is

$$\begin{aligned}\sqrt{9604} &= 2 \times 7 \times 7 \\ &= 98\end{aligned}$$

(iii) 5929

Prime factors of 5929 is

$$5929 = 11^2 \times 7^2$$

∴ The square root of 5929 is

$$\begin{aligned}\sqrt{5929} &= 11 \times 7 \\ &= 77\end{aligned}$$

(iv) 7056

Prime factors of 7056 is

$$7056 = 2^2 \times 2^2 \times 7^2 \times 3^2$$

∴ The square root of 7056 is

$$\begin{aligned}\sqrt{7056} &= 2 \times 2 \times 7 \times 3 \\ &= 84\end{aligned}$$

15. The students of class VIII of a school donated Rs 2401 for PM's National Relief Fund. Each student donated as many rupees as the number of students in the class, Find the number of students in the class.

Solution:

Let us consider number of students as a

Each student denoted a rupee

So, total amount collected is $a \times a$ rupees = 2401

RD Sharma Solutions for Class 8 Maths Chapter 3 –
Squares and Square Roots

$$a^2 = 2401$$

$$a = \sqrt{2401}$$

$$a = 49$$

∴ There are 49 students in the class.

16. A PT teacher wants to arrange maximum possible number of 6000 students in a field such that the number of rows is equal to the number of columns. Find the number of rows if 71 were left out after arrangement.

Solution:

Let us consider number of rows as a

No. of columns = a

Total number of students who sat in the field = a^2

Total students $a^2 + 71 = 6000$

$$a^2 = 5929$$

$$a = \sqrt{5929}$$

$$a = 77$$

∴ total number of rows are 77.

EXERCISE 3.5

PAGE NO: 3.43

1. Find the square root of each of the following by long division method:

- (i) 12544 (ii) 97344
 (iii) 286225 (iv) 390625
 (v) 363609 (vi) 974169
 (vii) 120409 (viii) 1471369
 (ix) 291600 (x) 9653449
 (xi) 1745041 (xii) 4008004
 (xiii) 20657025 (xiv) 152547201
 (xv) 20421361 (xvi) 62504836
 (xvii) 82264900 (xviii) 3226694416
 (xix) 6407522209 (xx) 3915380329

Solution:

(i) 12544

By using long division method

	112
1	12544
	1
21	25
	24
222	444
	444
	0

 \therefore the square root of 12544

$$\sqrt{12544} = 112$$

(ii) 97344

By using long division method

	312
3	97344
	9
61	73
	61
622	1244
	1244
	0

 \therefore the square root of 97344

$$\sqrt{97344} = 312$$

(iii) 286225

RD Sharma Solutions for Class 8 Maths Chapter 3 –
Squares and Square Roots

By using long division method

$$\begin{array}{r} 535 \\ 5 \overline{) 286225} \\ \underline{25} \\ 103 \\ \underline{362} \\ 309 \\ 1065 \\ \underline{5325} \\ 5325 \\ \underline{0} \end{array}$$

\therefore the square root of 286225
 $\sqrt{286225} = 535$

(iv) 390625

By using long division method

$$\begin{array}{r} 625 \\ 6 \overline{) 390625} \\ \underline{36} \\ 122 \\ \underline{306} \\ 244 \\ 1245 \\ \underline{6225} \\ 6225 \\ \underline{0} \end{array}$$

\therefore the square root of 390625
 $\sqrt{390625} = 625$

(v) 363609

By using long division method

$$\begin{array}{r} 603 \\ 6 \overline{) 363609} \\ \underline{36} \\ 1203 \\ \underline{3609} \\ 3609 \\ \underline{0} \end{array}$$

\therefore the square root of 363609
 $\sqrt{363609} = 603$

(vi) 974169

By using long division method

RD Sharma Solutions for Class 8 Maths Chapter 3 –
Squares and Square Roots

$$\begin{array}{r}
 987 \\
 9 \overline{) 974169} \\
 \underline{81} \\
 188 \\
 188 \overline{) 1641} \\
 \underline{1504} \\
 1967 \\
 1967 \overline{) 13769} \\
 \underline{13769} \\
 0
 \end{array}$$

∴ the square root of 974169

$$\sqrt{974169} = 987$$

(vii) 120409

By using long division method

$$\begin{array}{r}
 347 \\
 3 \overline{) 120409} \\
 \underline{9} \\
 64 \\
 64 \overline{) 304} \\
 \underline{256} \\
 687 \\
 687 \overline{) 4809} \\
 \underline{4809} \\
 0
 \end{array}$$

∴ the square root of 120409

$$\sqrt{120409} = 347$$

(viii) 1471369

By using long division method

$$\begin{array}{r}
 1213 \\
 1 \overline{) 1471369} \\
 \underline{1} \\
 22 \\
 22 \overline{) 47} \\
 \underline{44} \\
 241 \\
 241 \overline{) 313} \\
 \underline{241} \\
 2423 \\
 2423 \overline{) 7269} \\
 \underline{7269} \\
 0
 \end{array}$$

∴ the square root of 1471369

$$\sqrt{1471369} = 1213$$

(ix) 291600

By using long division method

$$\begin{array}{r}
 540 \\
 5 \overline{) 291600} \\
 \underline{25} \\
 416 \\
 \underline{416} \\
 00 \\
 \underline{00} \\
 0
 \end{array}$$

\therefore the square root of 291600
 $\sqrt{291600} = 540$

(x) 9653449

By using long division method

$$\begin{array}{r}
 3107 \\
 3 \overline{) 9653449} \\
 \underline{9} \\
 65 \\
 \underline{61} \\
 43449 \\
 \underline{43449} \\
 0
 \end{array}$$

\therefore the square root of 9653449
 $\sqrt{9653449} = 3107$

(xi) 1745041

By using long division method

$$\begin{array}{r}
 1321 \\
 1 \overline{) 1745041} \\
 \underline{1} \\
 74 \\
 \underline{69} \\
 550 \\
 \underline{524} \\
 2641 \\
 \underline{2641} \\
 0
 \end{array}$$

\therefore the square root of 1745041
 $\sqrt{1745041} = 1321$

(xii) 4008004

By using long division method

$$\begin{array}{r}
 2002 \\
 2 \overline{) 4008004} \\
 \underline{4} \\
 40 \overline{) 000} \\
 \underline{0} \\
 400 \overline{) 080} \\
 \underline{0} \\
 4002 \overline{) 8004} \\
 \underline{8004} \\
 0
 \end{array}$$

\therefore the square root of 4008004
 $\sqrt{4008004} = 2002$

(xiii) 20657025

By using long division method

$$\begin{array}{r}
 4545 \\
 4 \overline{) 20657025} \\
 \underline{16} \\
 85 \overline{) 465} \\
 \underline{425} \\
 904 \overline{) 4070} \\
 \underline{3616} \\
 9085 \overline{) 45425} \\
 \underline{45425} \\
 0
 \end{array}$$

\therefore the square root of 20657025
 $\sqrt{20657025} = 4545$

(xiv) 152547201

By using long division method

$$\begin{array}{r}
 12351 \\
 1 \overline{) 152547201} \\
 \underline{1} \\
 22 \overline{) 52} \\
 \underline{44} \\
 243 \overline{) 854} \\
 \underline{729} \\
 2465 \overline{) 12572} \\
 \underline{12325} \\
 27701 \overline{) 24701} \\
 \underline{24701} \\
 0
 \end{array}$$

\therefore the square root of 152547201
 $\sqrt{152547201} = 12351$

(xv) 20421361

By using long division method

	4519
4	20421361
	16
85	442
	425
901	1713
	901
9029	81261
	81261
	0

\therefore the square root of 20421361
 $\sqrt{20421361} = 4519$

(xvi) 62504836

By using long division method

	7906
7	62504836
	49
149	1350
	1341
1580	948
15806	94836
	94836
	0

\therefore the square root of 62504836
 $\sqrt{62504836} = 7906$

(xvii) 82264900

By using long division method

RD Sharma Solutions for Class 8 Maths Chapter 3 –
Squares and Square Roots

	9070
9	82264900
	81
180	126
1807	12649
	12649
14140	00
	0
	×

∴ the square root of 82264900
 $\sqrt{82264900} = 9070$

(xviii) 3226694416

By using long division method

	56804
5	3226694416
	25
106	726
	636
1128	9069
	9024
11360	4544
	0
113604	454416
	454416
	×

∴ the square root of 3226694416
 $\sqrt{3226694416} = 56804$

(xix) 6407522209

By using long division method

RD Sharma Solutions for Class 8 Maths Chapter 3 –
Squares and Square Roots

	80047
8	6407522209
	64
160	07
	0
1600	752
	00
16004	75222
	64016
160087	1120609
	1120609
	x

∴ the square root of 6407522209
 $\sqrt{6407522209} = 80047$

(xx) 3915380329

By using long division method

	62573
6	3915380329
	36
122	315
	244
1245	07138
	6225
12507	91303
	87549
125143	0375429
	375429
	x

∴ the square root of 3915380329
 $\sqrt{3915380329} = 62573$

2. Find the least number which must be subtracted from the following numbers to make them a perfect square:

(i) 2361

(ii) 194491

(iii) 26535

(iv) 161605

(v) 4401624

Solution:

(i) 2361

By using long division method

$$\begin{array}{r}
 48 \\
 4 \overline{) 2361} \\
 \underline{16} \\
 88 \quad 761 \\
 \underline{704} \\
 57
 \end{array}$$

∴ 57 has to be subtracted from 2361 to get a perfect square.

(ii) 194491

By using long division method

$$\begin{array}{r}
 441 \\
 4 \overline{) 194491} \\
 \underline{16} \\
 84 \quad 344 \\
 \underline{336} \\
 881 \quad 891 \\
 \underline{881} \\
 10
 \end{array}$$

∴ 10 has to be subtracted from 194491 to get a perfect square.

(iii) 26535

By using long division method

$$\begin{array}{r}
 162 \\
 1 \overline{) 26535} \\
 \underline{1} \\
 26 \quad 165 \\
 \underline{156} \\
 322 \quad 935 \\
 \underline{644} \\
 291
 \end{array}$$

∴ 291 has to be subtracted from 26535 to get a perfect square.

(iv) 161605

By using long division method

RD Sharma Solutions for Class 8 Maths Chapter 3 –
Squares and Square Roots

$$\begin{array}{r}
 402 \\
 9 \overline{) 161605} \\
 \underline{16} \\
 802 \\
 \underline{1605} \\
 1604 \\
 \underline{1604} \\
 1
 \end{array}$$

∴ 1 has to be subtracted from 161605 to get a perfect square.

(v) 4401624

By using long division method

$$\begin{array}{r}
 2098 \\
 2 \overline{) 4401624} \\
 \underline{4} \\
 40 \\
 \underline{40} \\
 0 \\
 409 \\
 \underline{4016} \\
 3681 \\
 4188 \\
 \underline{33524} \\
 33504 \\
 \underline{33504} \\
 20
 \end{array}$$

∴ 20 has to be subtracted from 4401624 to get a perfect square.

3. Find the least number which must be added to the following numbers to make them a perfect square:

(i) 5607

(ii) 4931

(iii) 4515600

(iv) 37460

(v) 506900

Solution:

(i) 5607

By using long division method

RD Sharma Solutions for Class 8 Maths Chapter 3 –
Squares and Square Roots

$$\begin{array}{r}
 74 \\
 7 \overline{) 5607} \\
 \underline{49} \\
 144 707 \\
 \underline{576} \\
 131
 \end{array}$$

The remainder is 131

Since, $(74)^2 < 5607$

We take, the next perfect square number i.e., $(75)^2$

$(75)^2 = 5625 > 5607$

So, the number to be added = $5625 - 5607 = 18$

(ii) 4931

By using long division method

$$\begin{array}{r}
 70 \\
 7 \overline{) 4931} \\
 \underline{49} \\
 140 31 \\
 \underline{0} \\
 31
 \end{array}$$

The remainder is 31

Since, $(70)^2 < 4931$

We take, the next perfect square number i.e., $(71)^2$

$(71)^2 = 5041 > 4931$

So, the number to be added = $5041 - 4931 = 110$

(iii) 4515600

By using long division method

$$\begin{array}{r}
 2124 \\
 2 \overline{) 4515600} \\
 \underline{4} \\
 41 51 \\
 \underline{41} \\
 422 1056 \\
 \underline{844} \\
 4244 21200 \\
 \underline{16976} \\
 4224
 \end{array}$$

RD Sharma Solutions for Class 8 Maths Chapter 3 –
Squares and Square Roots

The remainder is 4224

Since, $(2124)^2 < 4515600$

We take, the next perfect square number i.e., $(2125)^2$

$(2125)^2 = 4515625 > 4515600$

So, the number to be added = $4515625 - 4515600 = 25$

(iv) 37460

By using long division method

$$\begin{array}{r} 193 \\ 1 \overline{) 37460} \\ \underline{1} \\ 29 \\ 29 \overline{) 274} \\ \underline{261} \\ 383 \\ 383 \overline{) 1360} \\ \underline{1149} \\ 211 \end{array}$$

The remainder is 211

Since, $(193)^2 < 37460$

We take, the next perfect square number i.e., $(194)^2$

$(194)^2 = 37636 > 37460$

So, the number to be added = $37636 - 37460 = 176$

(v) 506900

By using long division method

$$\begin{array}{r} 711 \\ 7 \overline{) 506900} \\ \underline{49} \\ 141 \\ 141 \overline{) 169} \\ \underline{141} \\ 1421 \\ 1421 \overline{) 2800} \\ \underline{1421} \\ 1379 \end{array}$$

The remainder is 1379

Since, $(711)^2 < 506900$

We take, the next perfect square number i.e., $(712)^2$

$(712)^2 = 506944 > 506900$

So, the number to be added = $506944 - 506900 = 44$

RD Sharma Solutions for Class 8 Maths Chapter 3 –
Squares and Square Roots**4. Find the greatest number of 5 digits which is a perfect square.****Solution:**

We know that the greatest 5 digit number is 99999

By using long division method

	316
3	99999
	9
61	99
	61
626	3899
	3766
	143

The remainder is 143

So, the greatest 5 digit perfect square number is:

$$99999 - 143 = 99856$$

 \therefore 99856 is the required greatest 5 digit perfect square number.**5. Find the least number of 4 digits which is a perfect square.****Solution:**

We know that the least 4 digit number is 1000

By using long division method

	31
3	1000
	9
61	100
	61
	39

The remainder is 39

Since, $(31)^2 < 1000$ We take, the next perfect square number i.e., $(32)^2$

$$(32)^2 = 1024 > 1000$$

 \therefore 1024 is the required least number 4 digit number which is a perfect square.**6. Find the least number of six digits which is a perfect square.****Solution:**

We know that the least 6 digit number is 100000

By using long division method

$$\begin{array}{r}
 316 \\
 3 \overline{) 100000} \\
 \underline{9} \\
 61 \\
 \underline{61} \\
 626 \\
 \underline{3900} \\
 \underline{3756} \\
 144
 \end{array}$$

The remainder is 144

Since, $(316)^2 < 100000$

We take, the next perfect square number i.e., $(317)^2$

$(317)^2 = 100489 > 100000$

$\therefore 100489$ is the required least number 6 digit number which is a perfect square.

7. Find the greatest number of 4 digits which is a perfect square.

Solution:

We know that the greatest 4 digit number is 9999

By using long division method

$$\begin{array}{r}
 91 \\
 9 \overline{) 9999} \\
 \underline{81} \\
 89 \\
 \underline{1899} \\
 \underline{1701} \\
 198
 \end{array}$$

The remainder is 198

So, the greatest 4 digit perfect square number is:

$9999 - 198 = 9801$

$\therefore 9801$ is the required greatest 4 digit perfect square number.

8. A General arranges his soldiers in rows to form a perfect square. He finds that in doing so, 60 soldiers are left out. If the total number of soldiers be 8160, find the number of soldiers in each row

Solution:

We know that the total number of soldiers = 8160

Number of soldiers left out = 60

Number of soldiers arranged in rows to form a perfect square = $8160 - 60 = 8100$

RD Sharma Solutions for Class 8 Maths Chapter 3 –
Squares and Square Roots

$$\begin{aligned}\therefore \text{number of soldiers in each row} &= \sqrt{8100} \\ &= \sqrt{9 \times 9 \times 10 \times 10} \\ &= 9 \times 10 \\ &= 90\end{aligned}$$

9. The area of a square field is 60025m^2 . A man cycles along its boundary at 18 Km/hr. In how much time will he return at the starting point?

Solution:

We know that the area of square field = 60025 m^2

$$\begin{aligned}\text{Speed of cyclist} &= 18\text{ km/h} \\ &= 18 \times (1000/60 \times 60) \\ &= 5\text{ m/s}^2\end{aligned}$$

$$\text{Area} = 60025\text{ m}^2$$

$$\text{Side}^2 = 60025$$

$$\begin{aligned}\text{Side} &= \sqrt{60025} \\ &= 245\end{aligned}$$

$$\begin{aligned}\text{We know, Total length of boundary} &= 4 \times \text{Side} \\ &= 4 \times 245 \\ &= 980\text{ m}\end{aligned}$$

$$\begin{aligned}\therefore \text{Time taken to return to the starting point} &= 980/5 \\ &= 196\text{ seconds} \\ &= 3\text{ minutes } 16\text{ seconds}\end{aligned}$$

10. The cost of levelling and turning a square lawn at Rs 2.50 per m^2 is Rs13322.50 Find the cost of fencing it at Rs 5 per metre.

Solution:

We know that the cost of levelling and turning a square lawn = 2.50 per m^2

Total cost of levelling and turning = Rs. 13322.50

$$\begin{aligned}\text{Total area of square lawn} &= 13322.50/2.50 \\ &= 5329\text{ m}^2\end{aligned}$$

$$\text{Side}^2 = 5329$$

$$\begin{aligned}\text{Side of square lawn} &= \sqrt{5329} \\ &= 73\text{ m}\end{aligned}$$

$$\begin{aligned}\text{So, total length of lawn} &= 4 \times 73 \\ &= 292\text{ m}\end{aligned}$$

$$\begin{aligned}\therefore \text{Cost of fencing the lawn at Rs 5 per metre} &= 292 \times 5 \\ &= \text{Rs. } 1460\end{aligned}$$

11. Find the greatest number of three digits which is a perfect square.

RD Sharma Solutions for Class 8 Maths Chapter 3 –
Squares and Square Roots**Solution:**

We know that the greatest 3 digit number is 999

By using long division method

$$\begin{array}{r} 31 \\ 3 \overline{) 999} \\ \underline{9} \\ 61 \\ \underline{61} \\ 38 \end{array}$$

The remainder is 38

So, the greatest 3 digit perfect square number is:

$$999 - 38 = 961$$

\therefore 961 is the required greatest 3 digit perfect square number.

12. Find the smallest number which must be added to 2300 so that it becomes a perfect square.**Solution:**

By using long division method let's find the square root of 2300

$$\begin{array}{r} 47 \\ 4 \overline{) 2300} \\ \underline{16} \\ 87 \\ \underline{700} \\ 700 \\ \underline{91} \end{array}$$

The remainder is 91

Since, $(47)^2 < 2300$

We take, the next perfect square number i.e., $(48)^2$

$$(48)^2 = 2304 > 2300$$

\therefore The smallest number required to be added to 2300 to get a perfect square is

$$2304 - 2300 = 4$$

EXERCISE 3.6

PAGE NO: 3.48

1. Find the square root of:**(i) 441/961****(ii) 324/841****(iii) 4 29/29****(iv) 2 14/25****(v) 2 137/196****(vi) 23 26/121****(vii) 25 544/729****(viii) 75 46/49****(ix) 3 942/2209****(x) 3 334/3025****(xi) 21 2797/3364****(xii) 38 11/25****(xiii) 23 394/729****(xiv) 21 51/169****(xv) 10 151/225****Solution:****(i) 441/961**

The square root of

$$\sqrt{441/961} = 21/31$$

(ii) 324/841

The square root of

$$\sqrt{324/841} = 18/29$$

(iii) 4 29/29

The square root of

$$\sqrt{4 \frac{29}{29}} = \sqrt{(225/49)} = 15/7$$

(iv) 2 14/25

The square root of

$$\sqrt{2 \frac{14}{25}} = \sqrt{(64/25)} = 8/5$$

(v) 2 137/196

The square root of

$$\sqrt{2 \frac{137}{196}} = \sqrt{(529/196)} = 23/14$$

RD Sharma Solutions for Class 8 Maths Chapter 3 –
Squares and Square Roots

(vi) $23\frac{26}{121}$

The square root of

$$\sqrt{23\frac{26}{121}} = \sqrt{2809/121} = 53/11$$

(vii) $25\frac{544}{729}$

The square root of

$$\sqrt{25\frac{544}{729}} = \sqrt{18769/729} = 137/27$$

(viii) $75\frac{46}{49}$

The square root of

$$\sqrt{75\frac{46}{49}} = \sqrt{3721/49} = 61/7$$

(ix) $3\frac{942}{2209}$

The square root of

$$\sqrt{3\frac{942}{2209}} = \sqrt{7569/2209} = 87/47$$

(x) $3\frac{334}{3025}$

The square root of

$$\sqrt{3\frac{334}{3025}} = \sqrt{9409/3025} = 97/55$$

(xi) $21\frac{2797}{3364}$

The square root of

$$\sqrt{21\frac{2797}{3364}} = \sqrt{73441/3364} = 271/58$$

(xii) $38\frac{11}{25}$

The square root of

$$\sqrt{38\frac{11}{25}} = \sqrt{961/25} = 31/5$$

(xiii) $23\frac{394}{729}$

The square root of

$$\sqrt{23\frac{394}{729}} = \sqrt{17161/729} = 131/27 = 4\frac{23}{27}$$

(xiv) $21\frac{51}{169}$

The square root of

$$\sqrt{21\frac{51}{169}} = \sqrt{3600/169} = 60/13 = 4\frac{8}{13}$$

(xv) $10\frac{151}{225}$

The square root of

$$\sqrt{(10\ 151/225)} = \sqrt{(2401/225)} = 49/15 = 3\ 4/15$$

2. Find the value of:

(i) $\sqrt{80}/\sqrt{405}$

(ii) $\sqrt{441}/\sqrt{625}$

(iii) $\sqrt{1587}/\sqrt{1728}$

(iv) $\sqrt{72} \times \sqrt{338}$

(v) $\sqrt{45} \times \sqrt{20}$

Solution:

(i) $\sqrt{80}/\sqrt{405}$

$$\sqrt{80}/\sqrt{405} = \sqrt{16}/\sqrt{81} = 4/9$$

(ii) $\sqrt{441}/\sqrt{625}$

$$\sqrt{441}/\sqrt{625} = 21/25$$

(iii) $\sqrt{1587}/\sqrt{1728}$

$$\sqrt{1587}/\sqrt{1728} = \sqrt{529}/\sqrt{576} = 23/24$$

(iv) $\sqrt{72} \times \sqrt{338}$

$$\sqrt{72} \times \sqrt{338} = \sqrt{(2 \times 2 \times 2 \times 3 \times 3)} \times \sqrt{(2 \times 13 \times 13)}$$

By using the formula $\sqrt{a} \times \sqrt{b} = \sqrt{(a \times b)}$

$$= \sqrt{(2 \times 2 \times 2 \times 3 \times 3 \times 2 \times 13 \times 13)}$$

$$= 2^2 \times 3 \times 13$$

$$= 156$$

(v) $\sqrt{45} \times \sqrt{20}$

$$\sqrt{45} \times \sqrt{20} = \sqrt{(5 \times 9 \times 9)} \times \sqrt{(5 \times 2 \times 2)}$$

By using the formula $\sqrt{a} \times \sqrt{b} = \sqrt{(a \times b)}$

$$= \sqrt{(5 \times 9 \times 9 \times 5 \times 2 \times 2)}$$

$$= 5 \times 9 \times 2$$

$$= 90$$

3. The area of a square field is $80\ 244/729$ square metres. Find the length of each side of the field.

Solution:

$$\begin{aligned} \text{We know that the given area} &= 80\ 244/729\ \text{m}^2 \\ &= 58564/729\ \text{m}^2 \end{aligned}$$

If L is length of each side

$$L^2 = 58564/729$$

RD Sharma Solutions for Class 8 Maths Chapter 3 –
Squares and Square Roots

$$\begin{aligned}L &= \sqrt{(58564/729)} = \sqrt{58564}/\sqrt{729} \\&= 242/27 \\&= 8 \frac{26}{27} \\ \therefore \text{Length is } 8 \frac{26}{27}\end{aligned}$$

4. The area of a square field is $30 \frac{1}{4} \text{m}^2$. Calculate the length of the side of the square.

Solution:

$$\begin{aligned}\text{We know that the given area} &= 30 \frac{1}{4} \text{ m}^2 \\&= 121/4 \text{ m}^2\end{aligned}$$

If L is length of each side then,

$$L^2 = 121/4$$

$$\begin{aligned}L &= \sqrt{(121/4)} = \sqrt{121}/\sqrt{4} \\&= 11/2\end{aligned}$$

\therefore Length is $11/2$

5. Find the length of a side of a square playground whose area is equal to the area of a rectangular field of dimensions 72m and 338 m.

Solution:

By using the formula

$$\begin{aligned}\text{Area of rectangular field} &= l \times b \\&= 72 \times 338 \text{ m}^2 \\&= 24336 \text{ m}^2\end{aligned}$$

$$\text{Area of square, } L^2 = 24336 \text{ m}^2$$

$$\begin{aligned}L &= \sqrt{24336} \\&= 156 \text{ m}\end{aligned}$$

\therefore Length of side of square playground is 156 m.

EXERCISE 3.7

PAGE NO: 3.52

Find the square root of the following numbers in decimal form:

1. 84.8241

Solution:

By using long division method

$$\begin{array}{r} 9.21 \\ 9 \overline{) 848241} \\ \underline{81} \\ 182 \\ \underline{364} \\ 1841 \\ \underline{1841} \\ 0 \end{array}$$

\therefore the square root of 84.8241

$$\sqrt{84.8241} = 9.21$$

2. 0.7225

Solution:

By using long division method

$$\begin{array}{r} 0.85 \\ 0 \overline{) 0.7225} \\ \underline{0} \\ 8 \\ \underline{64} \\ 165 \\ \underline{130} \\ 35 \\ \underline{325} \\ 0 \end{array}$$

\therefore the square root of 0.7225

$$\sqrt{0.7225} = 0.85$$

3. 0.813604

Solution:

By using long division method

RD Sharma Solutions for Class 8 Maths Chapter 3 –
Squares and Square Roots

$$\begin{array}{r}
 0.902 \\
 0 \overline{) 0.813604} \\
 \underline{0} \\
 9 \quad 81 \\
 \underline{81} \\
 180 \quad 36 \\
 \underline{0} \\
 1802 \quad 3604 \\
 \underline{3604} \\
 0
 \end{array}$$

\therefore the square root of 0.813604
 $\sqrt{0.813604} = 0.902$

4. 0.00002025

Solution:

By using long division method

$$\begin{array}{r}
 0.0045 \\
 0 \overline{) 0.00002025} \\
 \underline{0 \quad 0 \quad 0} \\
 4 \quad 20 \\
 \underline{16} \\
 85 \quad 425 \\
 \underline{425} \\
 0
 \end{array}$$

\therefore the square root of 0.00002025
 $\sqrt{0.00002025} = 0.0045$

5. 150.0625

Solution:

By using long division method

$$\begin{array}{r}
 12.25 \\
 1 \overline{) 150.0625} \\
 \underline{1} \\
 22 \quad 050 \\
 \underline{44} \\
 242 \quad 606 \\
 \underline{484} \\
 2445 \quad 12225 \\
 \underline{12225} \\
 0
 \end{array}$$

\therefore the square root of 150.0625
 $\sqrt{150.0625} = 12.25$

RD Sharma Solutions for Class 8 Maths Chapter 3 –
Squares and Square Roots**6. 225.6004****Solution:**

By using long division method

$$\begin{array}{r} 15.02 \\ 1 \overline{) 225.6004} \\ \underline{1} \\ 125 \\ 25 \overline{) 125} \\ \underline{125} \\ 060 \\ 300 \overline{) 060} \\ \underline{0} \\ 6004 \\ 3002 \overline{) 6004} \\ \underline{6004} \\ 0 \end{array}$$

 \therefore the square root of 225.6004

$$\sqrt{225.6004} = 15.02$$

7. 3600.720036**Solution:**

By using long division method

$$\begin{array}{r} 60.006 \\ 6 \overline{) 3600.720036} \\ \underline{36} \\ 000 \\ 120 \overline{) 000} \\ \underline{0} \\ 7200 \\ 1200 \overline{) 7200} \\ \underline{0000} \\ 720036 \\ 12006 \overline{) 720036} \\ \underline{720036} \\ 0 \end{array}$$

 \therefore the square root of 3600.720036

$$\sqrt{3600.720036} = 60.006$$

8. 236.144689**Solution:**

By using long division method

RD Sharma Solutions for Class 8 Maths Chapter 3 –
Squares and Square Roots

	15.367
1	236144689
	1
25	136
	125
303	1114
	909
3066	20546
	18396
30727	215089
	215089
	0

\therefore the square root of 236.144689
 $\sqrt{236.144689} = 15.367$

9. 0.00059049

Solution:

By using long division method

	0.0243
0	0.00059049
	0
0	0
	0
2	05
	4
44	190
	176
483	1449
	1449
	0

\therefore the square root of 0.00059049
 $\sqrt{0.00059049} = 0.0243$

10. 176.252176

Solution:

By using long division method

RD Sharma Solutions for Class 8 Maths Chapter 3 –
Squares and Square Roots

	13.276
1	176.252176
	1
13	076
	69
262	725
	524
2647	20121
	18529
26546	159276
	159276
	0

\therefore the square root of 176.252176
 $\sqrt{176.252176} = 13.276$

11. 9998.0001

Solution:

By using long division method

	99.99
9	9998.0001
	81
189	1898
	1701
1989	19700
	17901
19989	179901
	179901
	0

\therefore the square root of 9998.0001
 $\sqrt{9998.0001} = 99.99$

12. 0.00038809

Solution:

By using long division method

RD Sharma Solutions for Class 8 Maths Chapter 3 –
Squares and Square Roots

	0.0197
0	0.00038809
	0
0	000
	0
1	03
	1
29	288
	261
387	2709
	2709
	0

∴ the square root of 0.00038809
 $\sqrt{0.00038809} = 0.0197$

13. What is that fraction which when multiplied by itself gives 227.798649?

Solution:

Let us consider a number a

Where, $a = \sqrt{227.798649}$
 $= 15.093$

By using long division method let us verify

	15.093
1	227.798649
	1
25	127
	125
300	279
	0
3009	27986
	27081
30183	90549
	90549
	0

∴ 15.093 is the fraction which when multiplied by itself gives 227.798649.

14. The area of a square playground is 256.6404 square meter. Find the length of one side of the playground.

Solution:

We know that the given area of a square playground = 256.6404

i.e., $L^2 = 256.6404 \text{ m}^2$

$$L = \sqrt{256.6404}$$

$$= 16.02\text{m}$$

By using long division method let us verify

$$\begin{array}{r} 16.02 \\ 1 \overline{) 256.6404} \\ \underline{1} \\ 26 \\ \underline{156} \\ 320 \\ \underline{320} \\ 064 \\ \underline{0} \\ 3202 \\ \underline{6404} \\ 6404 \\ \underline{0} \end{array}$$

\therefore length of one side of the playground is 16.02m.

15. What is the fraction which when multiplied by itself gives 0.00053361?

Solution:

Let us consider a number a

$$\text{Where, } a = \sqrt{0.00053361}$$

$$= 0.0231$$

By using long division method let us verify

$$\begin{array}{r} 0.0231 \\ 0 \overline{) 0.00053361} \\ \underline{0} \\ 0 \\ \underline{000} \\ 2 \\ \underline{005} \\ 43 \\ \underline{133} \\ 129 \\ \underline{461} \\ 461 \\ \underline{461} \\ 0 \end{array}$$

\therefore 0.0231 is the fraction which when multiplied by itself gives 0.00053361.

16. Simplify:

(i) $(\sqrt{59.29} - \sqrt{5.29}) / (\sqrt{59.29} + \sqrt{5.29})$

(ii) $(\sqrt{0.2304} + \sqrt{0.1764}) / (\sqrt{0.2304} - \sqrt{0.1764})$

Solution:

(i) $(\sqrt{59.29} - \sqrt{5.29}) / (\sqrt{59.29} + \sqrt{5.29})$

Firstly let us find the square root $\sqrt{59.29}$ and $\sqrt{5.29}$

RD Sharma Solutions for Class 8 Maths Chapter 3 –
Squares and Square Roots

$$\begin{aligned}\sqrt{59.29} &= \sqrt{5929/100} \\ &= 77/10 \\ &= 7.7\end{aligned}$$

$$\begin{aligned}\sqrt{5.29} &= \sqrt{529/100} \\ &= 23/10 \\ &= 2.3\end{aligned}$$

$$\begin{aligned}\text{So, } (7.7 - 2.3) / (7.7 + 2.3) \\ &= 54/10 \\ &= 0.54\end{aligned}$$

$$(ii) (\sqrt{0.2304} + \sqrt{0.1764}) / (\sqrt{0.2304} - \sqrt{0.1764})$$

Firstly let us find the square root $\sqrt{0.2304}$ and $\sqrt{0.1764}$

$$\begin{aligned}\sqrt{0.2304} &= \sqrt{2304/10000} \\ &= 48/100 \\ &= 0.48\end{aligned}$$

$$\begin{aligned}\sqrt{0.1764} &= \sqrt{1764/10000} \\ &= 42/100 \\ &= 0.42\end{aligned}$$

$$\begin{aligned}\text{So, } (0.48 + 0.42) / (0.48 - 0.42) \\ &= 0.9/0.06 \\ &= 15\end{aligned}$$

17. Evaluate $\sqrt{50625}$ and hence find the value of $\sqrt{506.25} + \sqrt{5.0625}$

Solution:

By using long division method let us find the $\sqrt{50625}$

$$\begin{array}{r} 225 \\ 2 \overline{) 50625} \\ \underline{4} \\ 42 \overline{) 106} \\ \underline{84} \\ 445 \overline{) 2225} \\ \underline{2225} \\ 0 \end{array}$$

$$\begin{aligned}\text{So now, } \sqrt{506.25} &= \sqrt{50625/100} \\ &= 225/10 \\ &= 22.5\end{aligned}$$

$$\begin{aligned}\sqrt{5.0625} &= \sqrt{50625/10000} \\ &= 225/100 \\ &= 2.25\end{aligned}$$

RD Sharma Solutions for Class 8 Maths Chapter 3 –
Squares and Square Roots

So equating in the above equation we get,

$$\begin{aligned}\sqrt{506.25} + \sqrt{5.0625} &= 22.5 + 2.25 \\ &= 24.75\end{aligned}$$

18. Find the value of $\sqrt{103.0225}$ and hence find the value of

(i) $\sqrt{10302.25}$

(ii) $\sqrt{1.030225}$

Solution:

By using long division method let us find the $\sqrt{103.0225}$

	10.15
1	$\overline{)1030225}$
	1
20	$\overline{)003}$
	0
201	$\overline{)302}$
	201
2025	$\overline{)10125}$
	10125
	0

So now, (i) $\sqrt{10302.25} = \sqrt{(10302.25 \times 100)}$

$$= 10 \times 10.15$$

$$= 101.5$$

(ii) $\sqrt{1.030225} = \sqrt{1.030225 / 1000}$

$$= 10.15/10$$

$$= 1.015$$

EXERCISE 3.8

PAGE NO: 3.56

1. Find the square root of each of the following correct to three places of decimal.

(i) 5 (ii) 7

(iii) 17 (iv) 20

(v) 66 (vi) 427

(vii) 1.7 (viii) 23.1

(ix) 2.5 (x) 237.615

(xi) 15.3215 (xii) 0.9

(xiii) 0.1 (xiv) 0.016

(xv) 0.00064 (xvi) 0.019

(xvii) $\frac{7}{8}$ (xviii) $\frac{5}{12}$

(xix) $2\frac{1}{2}$ (xx) $287\frac{5}{8}$

Solution:

(i) 5

By using long division method

	2.2360
2	5.000000
	4
42	100
	84
443	1600
	1329
4466	27100
	26796
44720	30400

\therefore the square root of 5 is 2.236

(ii) 7

By using long division method

RD Sharma Solutions for Class 8 Maths Chapter 3 –
Squares and Square Roots

	2.6457
2	7.000000
	4
46	300
	276
524	2400
	2096
5285	30400
	26425
52927	397500
	370489
	27011

∴ the square root of 7 is 2.646

(iii) 17

By using long division method

	4.123
4	17.000000
	16
81	1.00
	81
822	1900
	1644
8243	25600
	24729
82431	87100
	82431
	4669

∴ the square root of 17 is 4.123

(iv) 20

By using long division method

	4.4721
4	20.000000
	16
84	400
	336
887	6400
	6209
8942	19100
	17884
89441	121600
	89441
	32159

RD Sharma Solutions for Class 8 Maths Chapter 3 –
Squares and Square Roots

\therefore the square root of 20 is 4.472

(v) 66

By using long division method

	8 1240
8	66.000000
	64
161	200
	161
1622	3900
	3244
16244	65600
	64976
162480	62400

\therefore the square root of 66 is 8.124

(vi) 427

By using long division method

	20.6639
2	427.000000
	4
40	027
	0
406	2700
	2436
4126	26400
	24756
41323	164400
	123969
413269	4043100
	3719421
	323679

\therefore the square root of 427 is 20.664

(vii) 1.7

By using long division method

RD Sharma Solutions for Class 8 Maths Chapter 3 –
Squares and Square Roots

	1 3038
1	1 700000
	1
23	0 70
	69
260	100
	0
2603	10000
	7809
26068	219100
	208544
	10556

∴ the square root of 1.7 is 1.304

(viii) 23.1

By using long division method

	4.8062
4	23100000
	16
88	710
	704
960	600
	0
9606	60000
	57636
96122	236400
	192244
	44156

∴ the square root of 23.1 is 4.806

(ix) 2.5

By using long division method

	1.5811
1	2 500000
	1
25	150
	125
308	2500
	2464
3161	3600
	3161
31621	43900
	31621
	2279

\therefore the square root of 2.5 is 1.581

(x) 237.615

By using long division method

	15.4147
1	237.615000
	1
25	137
	125
304	1261
	1216
3081	4550
	3081
30824	146900
	123296
308287	2360400
	2158009
	202391

the square root of 237.615 is 15.415

(xi) 15.3215

By using long division method

	3.9142
3	15.321500
	9
69	632
	621
781	1115
	781
7824	33400
	31296
78282	210400
	156564
	53836

\therefore the square root of 15.3215 is 3.914

(xii) 0.9

By using long division method

RD Sharma Solutions for Class 8 Maths Chapter 3 –
Squares and Square Roots

	0.9486
0	0.900000
	0
9	090
	81
184	900
	736
1888	16400
	15104
18966	129600
	113796
	15804

∴ the square root of 0.9 is 0.949

(xiii) 0.1

By using long division method

	0.3162
0	0.100000
	0
3	10
	9
61	100
	61
626	3900
	3756
6322	14400
	12644
	1756

∴ the square root of 0.1 is 0.316

(xiv) 0.016

By using long division method

	0.1264
0	0.016000
	0
1	001
	1
22	060
	44
246	1600
	1476
2524	12400
	10096
	2304

RD Sharma Solutions for Class 8 Maths Chapter 3 –
Squares and Square Roots

\therefore the square root of 0.016 is 0.126

(xv) 0.00064

By using long division method

	0.0252
0	0.000640
	0
0	0.00
	0
2	006
	4
45	240
	225
502	1500
	1004
	496

\therefore the square root of 0.00064 is 0.025

(xvi) 0.019

By using long division method

	0.1378
0	0.019000
	0
1	01
	1
23	090
	69
267	2100
	1869
2748	23100
	21984
	1116

\therefore the square root of 0.019 is 0.138

(xvii) $7/8$

By using long division method

RD Sharma Solutions for Class 8 Maths Chapter 3 –
Squares and Square Roots

	0.9354
0	0.875000
	0
9	087
	81
183	650
	549
1865	10100
	9325
18704	77500
	74816
	2684

∴ the square root of $7/8$ is 0.935

(xviii) $5/12$

By using long division method

	0.6454
0	0.416666
	0
6	41
	36
124	566
	496
1285	7066
	6245
12904	64100
	51616
	12484

∴ the square root of $5/12$ is 0.645

(xix) $2\frac{1}{2}$

By using long division method

RD Sharma Solutions for Class 8 Maths Chapter 3 –
Squares and Square Roots

	1 5811
1	2500000
	1
25	150
	125
308	2500
	2464
3161	3600
	3161
31621	43900
	31621
	12279

∴ the square root of $5/2$ is 1.581

(xx) $287\frac{5}{8}$

By using long division method

	16.9593
1	287.62
	1
26	187
	156
329	3162
	2961
3385	20100
	16925
33909	317500
	305181
339183	1231900
	1017549
	214351

∴ the square root of $2301/8$ is 16.960

2. Find the square root of 12.0068 correct to four decimal places.

Solution:

By using long division method

RD Sharma Solutions for Class 8 Maths Chapter 3 – Squares and Square Roots

	3.46508
3	12 00 68
	9
64	300
	256
686	4468
	4116
6925	35200
	34625
693008	5750000
	5544064
	205936

∴ the square root of 12.0068 is 3.4651

3. Find the square root of 11 correct to five decimal places.

Solution:

By using long division method

	3.316624
3	11 00 00 00
	9
63	200
	189
661	1100
	661
6626	43900
	39756
66326	414400
	398196
663322	1620400
	1327444
6633244	29295600
	26532976
	2762624

∴ the square root of 11 is 3.31662

4. Give that: $\sqrt{2} = 1.414$, $\sqrt{3} = 1.732$, $\sqrt{5} = 2.236$ and $\sqrt{7} = 2.646$, evaluate each of the following:

(i) $\sqrt{(144/7)}$

(ii) $\sqrt{(2500/3)}$

Solution:

(i) $\sqrt{(144/7)}$

RD Sharma Solutions for Class 8 Maths Chapter 3 –
Squares and Square Roots

Now let us simplify the given equation

$$\begin{aligned}\sqrt{144/7} &= \sqrt{(12 \times 12)/7} \\ &= 12/2.646 \\ &= 4.535\end{aligned}$$

(ii) $\sqrt{2500/3}$

Now let us simplify the given equation

$$\begin{aligned}\sqrt{2500/3} &= \sqrt{(5 \times 5 \times 10 \times 10)/3} \\ &= 5 \times 10/1.732 \\ &= 50/1.732 \\ &= 28.867\end{aligned}$$

5. Given that $\sqrt{2} = 1.414$, $\sqrt{3} = 1.732$, $\sqrt{5} = 2.236$ and $\sqrt{7} = 2.646$ find the square roots of the following:

(i) $196/75$

(ii) $400/63$

(iii) $150/7$

(iv) $256/5$

(v) $27/50$

Solution:

(i) $196/75$

Let us find the square root for $196/75$

$$\begin{aligned}\sqrt{196/75} &= \sqrt{196}/\sqrt{75} \\ &= \sqrt{(14 \times 14)}/\sqrt{(5 \times 5 \times 3)} \\ &= 14/(5\sqrt{3}) \\ &= 14/(5 \times 1.732) \\ &= 14/8.66 \\ &= 1.617\end{aligned}$$

(ii) $400/63$

Let us find the square root for $400/63$

$$\begin{aligned}\sqrt{400/63} &= \sqrt{400}/\sqrt{63} \\ &= \sqrt{(20 \times 20)}/\sqrt{(3 \times 3 \times 7)} \\ &= 20/(3\sqrt{7}) \\ &= 20/(3 \times 2.646) \\ &= 20/7.938 \\ &= 2.520\end{aligned}$$

(iii) $150/7$

Let us find the square root for $150/7$

RD Sharma Solutions for Class 8 Maths Chapter 3 –
Squares and Square Roots

$$\begin{aligned}\sqrt[3]{(150/7)} &= \sqrt[3]{(150)/\sqrt[3]{(7)}} \\ &= \sqrt[3]{(3 \times 5 \times 5 \times 2)/\sqrt[3]{(7)}} \\ &= (5\sqrt[3]{3 \times 2})/\sqrt[3]{(7)} \\ &= 5 \times 1.732 \times 1.414/ (2.646) \\ &= 12.245/2.646 \\ &= 4.628\end{aligned}$$

(iv) 256/5

Let us find the square root for 256/5

$$\begin{aligned}\sqrt{(256/5)} &= \sqrt{(256)/\sqrt{(5)}} \\ &= \sqrt{(16 \times 16)/\sqrt{(5)}} \\ &= 16/\sqrt{(5)} \\ &= 16/2.236 \\ &= 7.155\end{aligned}$$

(v) 27/50

Let us find the square root for 27/50

$$\begin{aligned}\sqrt{(27/50)} &= \sqrt{(27)/\sqrt{(50)}} \\ &= \sqrt{(3 \times 3 \times 3)/\sqrt{(5 \times 5 \times 2)}} \\ &= (3\sqrt{3})/(5\sqrt{2}) \\ &= (3 \times 1.732)/(5 \times 1.414) \\ &= 5.196/7.07 \\ &= 0.735\end{aligned}$$

EXERCISE 3.9

PAGE NO: 3.61

Using square root table, find the square roots of the following:

1. 7

Solution:

From square root table we know,

Square root of 7 is:

$$\sqrt{7} = 2.645$$

∴ The square root of 7 is 2.645

2. 15

Solution:

From square root table we know,

Square root of 15 is:

$$\sqrt{15} = 3.8729$$

∴ The square root of 15 is 3.873

3. 74

Solution:

From square root table we know,

Square root of 74 is:

$$\sqrt{74} = 8.6023$$

∴ The square root of 74 is 8.602

4. 82

Solution:

From square root table we know,

Square root of 82 is:

$$\sqrt{82} = 9.0553$$

∴ The square root of 82 is 9.055

5. 198

Solution:

From square root table we know,

Square root of 198 is:

$$\sqrt{198} = 14.0712$$

∴ The square root of 198 is 14.071

6. 540

RD Sharma Solutions for Class 8 Maths Chapter 3 –
Squares and Square Roots**Solution:**

From square root table we know,

Square root of 540 is:

$$\sqrt{540} = 23.2379$$

∴ The square root of 540 is 23.24

7. 8700**Solution:**

From square root table we know,

Square root of 8700 is:

$$\sqrt{8700} = 93.2737$$

∴ The square root of 8700 is 93.27

8. 3509**Solution:**

From square root table we know,

Square root of 3509 is:

$$\sqrt{3509} = 59.2368$$

∴ The square root of 3509 is 59.235

9. 6929**Solution:**

From square root table we know,

Square root of 6929 is:

$$\sqrt{6929} = 83.2406$$

∴ The square root of 6929 is 83.239

10. 25725**Solution:**

From square root table we know,

Square root of 25725 is:

$$\sqrt{25725} = 160.3901$$

∴ The square root of 25725 is 160.41

11. 1312.**Solution:**

From square root table we know,

Square root of 1312 is:

$$\sqrt{1312} = 36.2215$$

RD Sharma Solutions for Class 8 Maths Chapter 3 –
Squares and Square Roots

∴ The square root of 1312 is 36.22

12. 4192**Solution:**

From square root table we know,

Square root of 4192 is:

$$\sqrt{4192} = 64.7456$$

∴ The square root of 4192 is 64.75

13. 4955**Solution:**

From square root table we know,

Square root of 4955 is:

$$\sqrt{4955} = 70.3917$$

∴ The square root of 4955 is 70.39

14. 99/144**Solution:**

From square root table we know,

Square root of 99/144 is:

$$\sqrt{(99/144)} = 0.82915$$

∴ The square root of 99/144 is 0.829

15. 57/169**Solution:**

From square root table we know,

Square root of 57/169 is:

$$\sqrt{(57/169)} = 0.58207$$

∴ The square root of 57/169 is 0.581

16. 101/169**Solution:**

From square root table we know,

Square root of 101/169 is:

$$\sqrt{(101/169)} = 0.77306$$

∴ The square root of 101/169 is 0.773

17. 13.21**Solution:**

RD Sharma Solutions for Class 8 Maths Chapter 3 –
Squares and Square Roots

From square root table we know,
Square root of 13.21 is:
 $\sqrt{13.21} = 3.6345$
 \therefore The square root of 13.21 is 3.635

18. 21.97**Solution:**

From square root table we know,
Square root of 21.97 is:
 $\sqrt{21.97} = 4.6872$
 \therefore The square root of 21.97 is 4.6872

19. 110**Solution:**

From square root table we know,
Square root of 110 is:
 $\sqrt{110} = 10.4880$
 \therefore The square root of 110 is 10.488

20. 1110**Solution:**

From square root table we know,
Square root of 1110 is:
 $\sqrt{1110} = 33.3166$
 \therefore The square root of 1110 is 33.317

21. 11.11**Solution:**

From square root table we know,
Square root of 11.11 is:
 $\sqrt{11.11} = 3.33316$
 \therefore The square root of 11.11 is 3.333

22. The area of a square field is 325m^2 . Find the approximate length of one side of the field.**Solution:**

We know that the given area of the field = 325 m^2
To find the approximate length of the side of the field we will have to calculate the square root of 325

$$\sqrt{325} = 18.027 \text{ m}$$

∴ The approximate length of one side of the field is 18.027 m

23. Find the length of a side of a square, whose area is equal to the area of a rectangle with sides 240 m and 70 m.

Solution:

We know that from the question,

Area of square = Area of rectangle

$$\text{Side}^2 = 240 \times 70$$

$$\text{Side} = \sqrt{240 \times 70}$$

$$= \sqrt{10 \times 10 \times 2 \times 2 \times 2 \times 3 \times 7}$$

$$= 20\sqrt{42}$$

$$= 20 \times 6.48$$

$$= 129.60 \text{ m}$$

∴ The length of side of the square is 129.60 m